

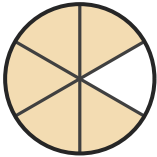
Name the Fraction

Name: _____

Date: _____

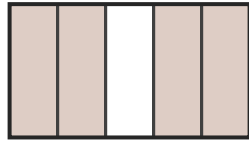
Circle the correct name for each shaded fraction. — Up to Eighths

1)



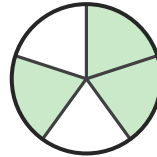
- A. one-quarter
- B. six-eighths
- C. five-sixths

2)



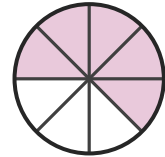
- A. four-fifths
- B. one-eighth
- C. three-sixths

3)



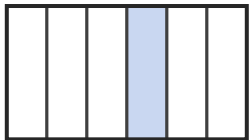
- A. three-fifths
- B. four-sixths
- C. two-quarters

4)



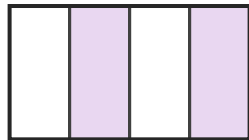
- A. five-sixths
- B. five-eighths
- C. three-eighths

5)



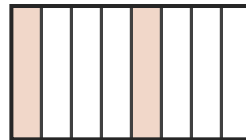
- A. one-fifth
- B. one-third
- C. one-sixth

6)



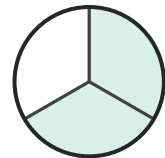
- A. two-thirds
- B. three-quarters
- C. two-quarters

7)



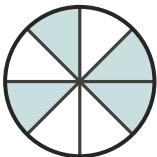
- A. two-sixths
- B. one-third
- C. two-eighths

8)



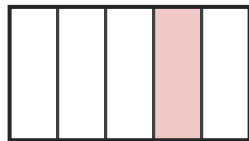
- A. two-thirds
- B. three-sixths
- C. one-third

9)



- A. two-thirds
- B. four-eighths
- C. three-fifths

10)



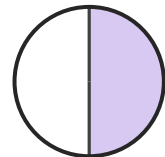
- A. six-eighths
- B. one-fifth
- C. two-sixths

11)



- A. three-quarters
- B. five-sixths
- C. three-fifths

12)



- A. four-fifths
- B. three-eighths
- C. one-half





Answer Key

1) C. five-sixths

4) B. five-eighths

7) C. two-eighths

10) B. one-fifth

2) A. four-fifths

5) C. one-sixth

8) A. two-thirds

11) A. three-quarters

3) A. three-fifths

6) C. two-quarters

9) B. four-eighths

12) C. one-half