

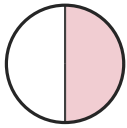
Write the Fraction

Name: _____

Date: _____

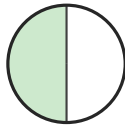
Write the fraction shown by each shaded shape. — Halves & Quarters

1)



—

2)



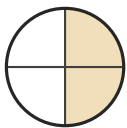
—

3)



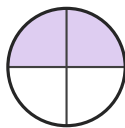
—

4)



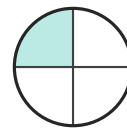
—

5)



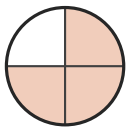
—

6)



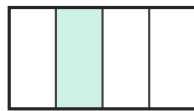
—

7)



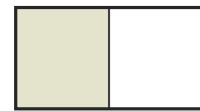
—

8)



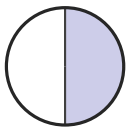
—

9)



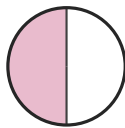
—

10)



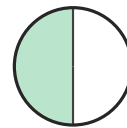
—

11)



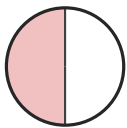
—

12)



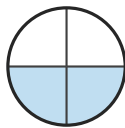
—

13)



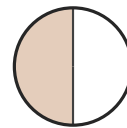
—

14)



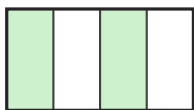
—

15)



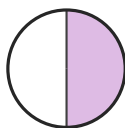
—

16)



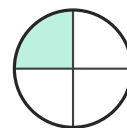
—

17)



—

18)



—



Answer Key

1) $1/2$

4) $2/4$

7) $3/4$

10) $1/2$

13) $1/2$

16) $2/4$

2) $1/2$

5) $2/4$

8) $1/4$

11) $1/2$

14) $2/4$

17) $1/2$

3) $1/2$

6) $1/4$

9) $1/2$

12) $1/2$

15) $1/2$

18) $1/4$

