

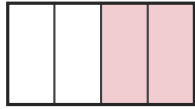
Write the Fraction

Name: _____

Date: _____

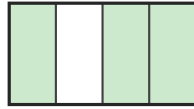
Write the fraction shown by each shaded shape. — Halves & Quarters

1)



—

2)



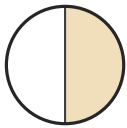
—

3)



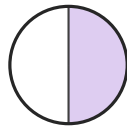
—

4)



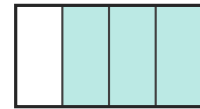
—

5)



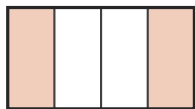
—

6)




—

7)



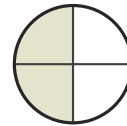
—

8)



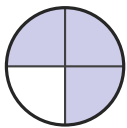
—

9)



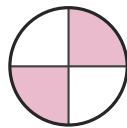
—

10)




—

11)




—

12)



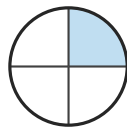
—

13)



—

14)



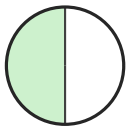
—

15)




—

16)



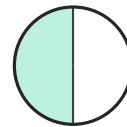
—

17)



—

18)



—





Answer Key

1) $\frac{2}{4}$

4) $\frac{1}{2}$

7) $\frac{2}{4}$

10) $\frac{3}{4}$

13) $\frac{1}{2}$

16) $\frac{1}{2}$

2) $\frac{3}{4}$

5) $\frac{1}{2}$

8) $\frac{1}{2}$

11) $\frac{2}{4}$

14) $\frac{1}{4}$

17) $\frac{1}{2}$

3) $\frac{2}{4}$

6) $\frac{3}{4}$

9) $\frac{2}{4}$

12) $\frac{1}{2}$

15) $\frac{1}{2}$

18) $\frac{1}{2}$

