

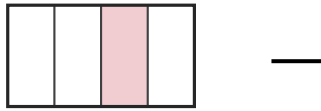
# Write the Fraction

Name: \_\_\_\_\_

Date: \_\_\_\_\_

Write the fraction shown by each shaded shape. — Halves, Thirds & Quarters

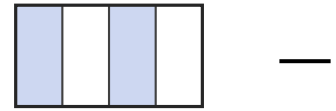
1)



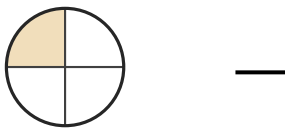
2)




3)



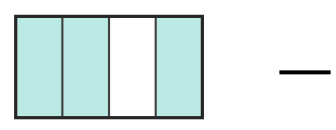
4)



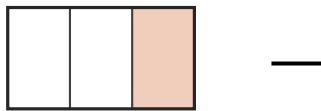
5)



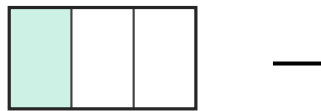
6)



7)



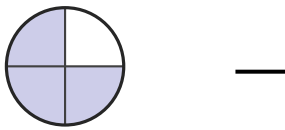
8)



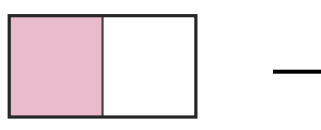
9)



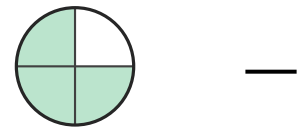
10)



11)



12)




13)



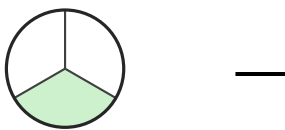
14)



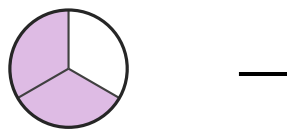
15)



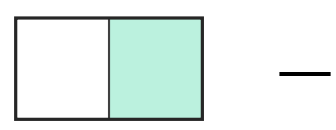
16)



17)



18)





## Answer Key

1)  $\frac{1}{4}$

4)  $\frac{1}{4}$

7)  $\frac{1}{3}$

10)  $\frac{3}{4}$

13)  $\frac{1}{2}$

16)  $\frac{1}{3}$

2)  $\frac{1}{2}$

5)  $\frac{1}{2}$

8)  $\frac{1}{3}$

11)  $\frac{1}{2}$

14)  $\frac{1}{2}$

17)  $\frac{2}{3}$

3)  $\frac{2}{4}$

6)  $\frac{3}{4}$

9)  $\frac{1}{2}$

12)  $\frac{3}{4}$

15)  $\frac{2}{4}$

18)  $\frac{1}{2}$

