

Write the Fraction

Name: _____

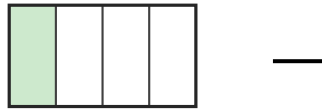
Date: _____

Write the fraction shown by each shaded shape. — Halves, Thirds & Quarters

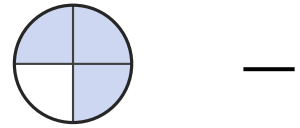
1)



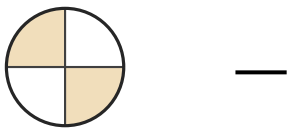
2)



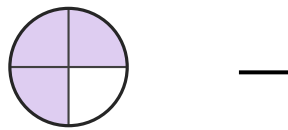
3)



4)



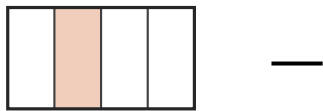
5)




6)




7)



8)



9)



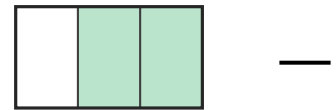
10)



11)



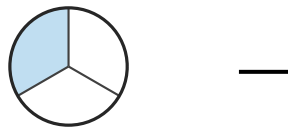
12)




13)



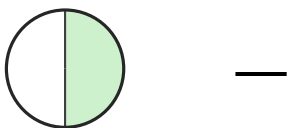
14)




15)




16)



17)



18)





Answer Key

1) $1/2$

4) $2/4$

7) $1/4$

10) $3/4$

13) $1/2$

16) $1/2$

2) $1/4$

5) $3/4$

8) $1/2$

11) $2/3$

14) $1/3$

17) $1/2$

3) $3/4$

6) $1/2$

9) $2/4$

12) $2/3$

15) $2/3$

18) $2/3$