

Write the Fraction

Name: _____

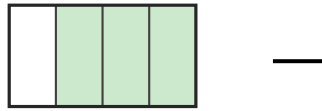
Date: _____

Write the fraction shown by each shaded shape. — Halves, Thirds & Quarters

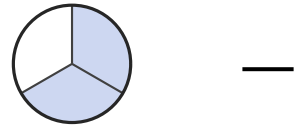
1)




2)



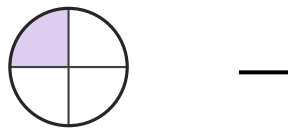
3)



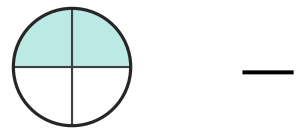
4)



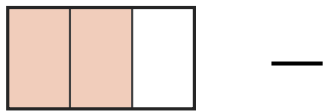
5)



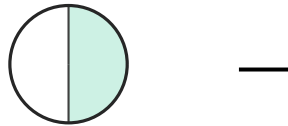
6)



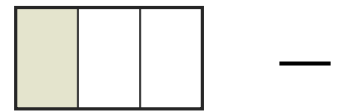
7)



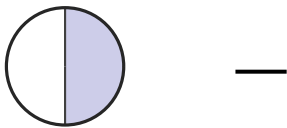
8)



9)




10)



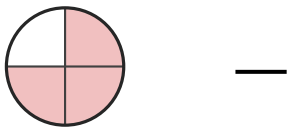
11)



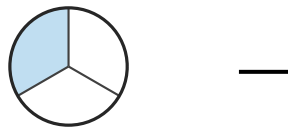
12)



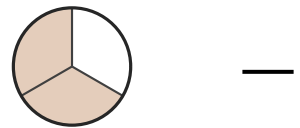
13)



14)



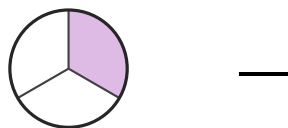
15)



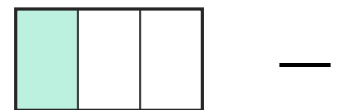
16)



17)



18)





Answer Key

1) $\frac{1}{2}$

4) $\frac{1}{3}$

7) $\frac{2}{3}$

10) $\frac{1}{2}$

13) $\frac{3}{4}$

16) $\frac{2}{3}$

2) $\frac{3}{4}$

5) $\frac{1}{4}$

8) $\frac{1}{2}$

11) $\frac{1}{2}$

14) $\frac{1}{3}$

17) $\frac{1}{3}$

3) $\frac{2}{3}$

6) $\frac{2}{4}$

9) $\frac{1}{3}$

12) $\frac{1}{2}$

15) $\frac{2}{3}$

18) $\frac{1}{3}$

