

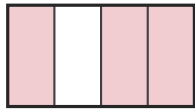
Write the Fraction

Name: _____

Date: _____

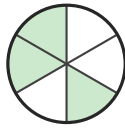
Write the fraction shown by each shaded shape. — Up to Sixths

1)



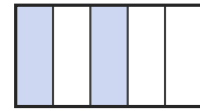
—

2)



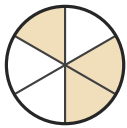
—

3)



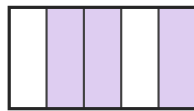
—

4)



—

5)



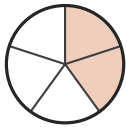
—

6)



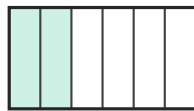
—

7)



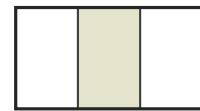
—

8)




—

9)



—

10)



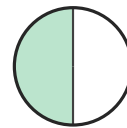
—

11)



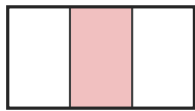
—

12)



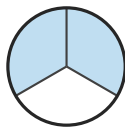
—

13)



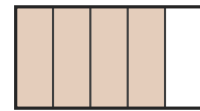
—

14)



—

15)



—

16)



—

17)



—

18)



—





Answer Key

1) $\frac{3}{4}$

4) $\frac{3}{6}$

7) $\frac{2}{5}$

10) $\frac{1}{2}$

13) $\frac{1}{3}$

16) $\frac{2}{5}$

2) $\frac{3}{6}$

5) $\frac{3}{5}$

8) $\frac{2}{6}$

11) $\frac{3}{5}$

14) $\frac{2}{3}$

17) $\frac{2}{5}$

3) $\frac{2}{5}$

6) $\frac{1}{2}$

9) $\frac{1}{3}$

12) $\frac{1}{2}$

15) $\frac{4}{5}$

18) $\frac{1}{6}$

