

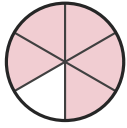
Write the Fraction

Name: _____

Date: _____

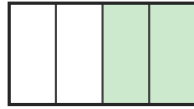
Write the fraction shown by each shaded shape. — Up to Sixths

1)



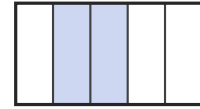
—

2)



—

3)



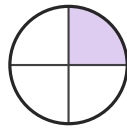
—

4)



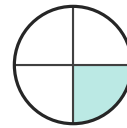
—

5)



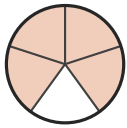
—

6)



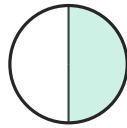
—

7)



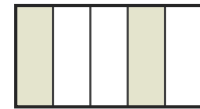
—

8)



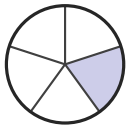
—

9)



—

10)



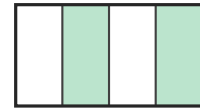
—

11)



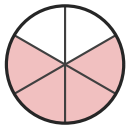
—

12)



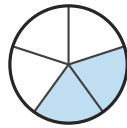
—

13)



—

14)



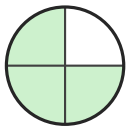
—

15)



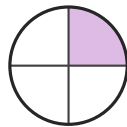
—

16)



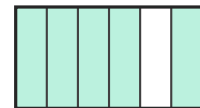
—

17)



—

18)



—



Answer Key

1) $5/6$

4) $3/5$

7) $4/5$

10) $1/5$

13) $4/6$

16) $3/4$

2) $2/4$

5) $1/4$

8) $1/2$

11) $2/3$

14) $2/5$

17) $1/4$

3) $2/5$

6) $1/4$

9) $2/5$

12) $2/4$

15) $2/3$

18) $5/6$

