

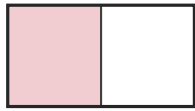
Write the Fraction

Name: _____

Date: _____

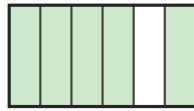
Write the fraction shown by each shaded shape. — Up to Sixths

1)



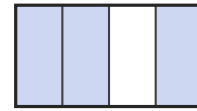
—

2)



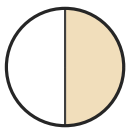
—

3)



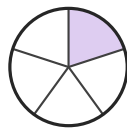
—

4)



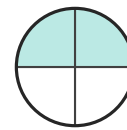
—

5)



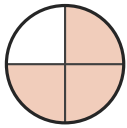
—

6)




—

7)



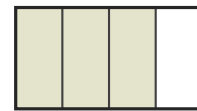
—

8)



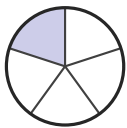
—

9)



—

10)



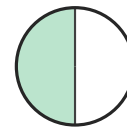
—

11)



—

12)



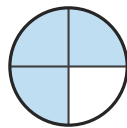
—

13)



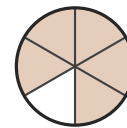
—

14)



—

15)



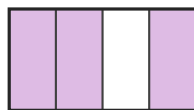
—

16)



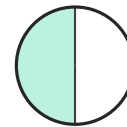
—

17)



—

18)



—



Answer Key

1) $1/2$

4) $1/2$

7) $3/4$

10) $1/5$

13) $1/6$

16) $3/5$

2) $5/6$

5) $1/5$

8) $1/2$

11) $1/6$

14) $3/4$

17) $3/4$

3) $3/4$

6) $2/4$

9) $3/4$

12) $1/2$

15) $5/6$

18) $1/2$

