

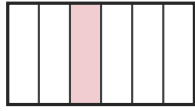
# Write the Fraction

Name: \_\_\_\_\_

Date: \_\_\_\_\_

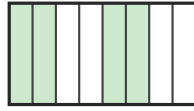
Write the fraction shown by each shaded shape. — Up to Eighths

1)



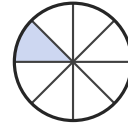
—

2)



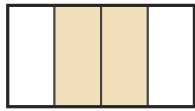
—

3)



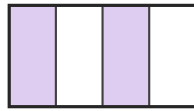
—

4)



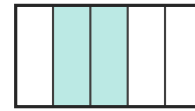
—

5)



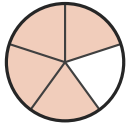
—

6)



—

7)



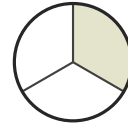
—

8)



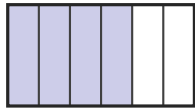
—

9)



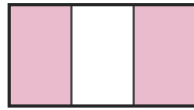
—

10)



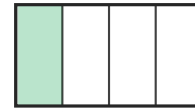
—

11)



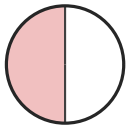
—

12)



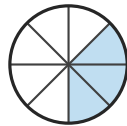
—

13)



—

14)



—

15)



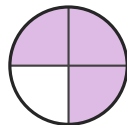
—

16)



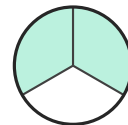
—

17)



—

18)



—



## Answer Key

1)  $1/6$

4)  $2/4$

7)  $4/5$

10)  $4/6$

13)  $1/2$

16)  $1/3$

2)  $4/8$

5)  $2/4$

8)  $2/6$

11)  $2/3$

14)  $3/8$

17)  $3/4$

3)  $1/8$

6)  $2/5$

9)  $1/3$

12)  $1/4$

15)  $5/6$

18)  $2/3$

