

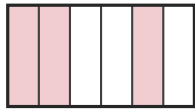
Write the Fraction

Name: _____

Date: _____

Write the fraction shown by each shaded shape. — Up to Eighths

1)



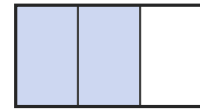
—

2)



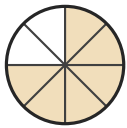
—

3)



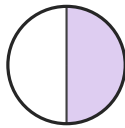
—

4)



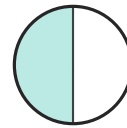
—

5)



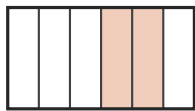
—

6)



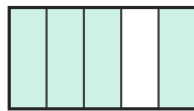
—

7)



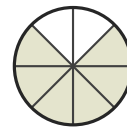
—

8)



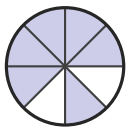
—

9)



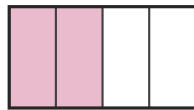
—

10)



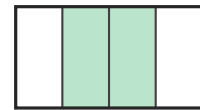
—

11)



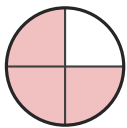
—

12)



—

13)



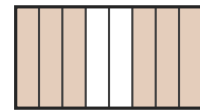
—

14)




—

15)



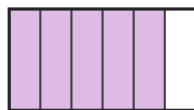
—

16)



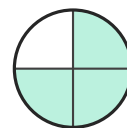
—

17)



—

18)



—



Answer Key

1) $\frac{3}{6}$

4) $\frac{6}{8}$

7) $\frac{2}{6}$

10) $\frac{6}{8}$

13) $\frac{3}{4}$

16) $\frac{1}{2}$

2) $\frac{1}{5}$

5) $\frac{1}{2}$

8) $\frac{4}{5}$

11) $\frac{2}{4}$

14) $\frac{1}{2}$

17) $\frac{5}{6}$

3) $\frac{2}{3}$

6) $\frac{1}{2}$

9) $\frac{6}{8}$

12) $\frac{2}{4}$

15) $\frac{6}{8}$

18) $\frac{3}{4}$

