

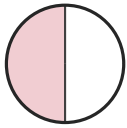
# Write the Fraction

Name: \_\_\_\_\_

Date: \_\_\_\_\_

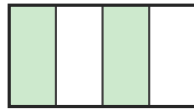
Write the fraction shown by each shaded shape. — Up to Eighths

1)



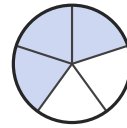
—

2)



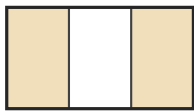
—

3)



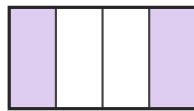
—

4)



—

5)



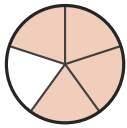
—

6)



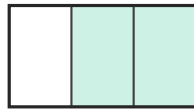
—

7)




—

8)



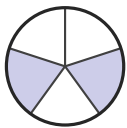
—

9)



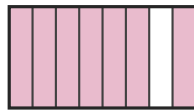
—

10)



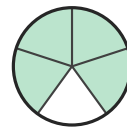
—

11)



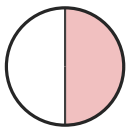
—

12)



—

13)



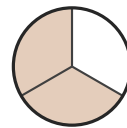
—

14)



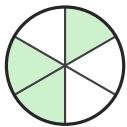
—

15)



—

16)



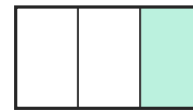
—

17)



—

18)



—





## Answer Key

1)  $1/2$

4)  $2/3$

7)  $4/5$

10)  $2/5$

13)  $1/2$

16)  $3/6$

2)  $2/4$

5)  $2/4$

8)  $2/3$

11)  $7/8$

14)  $1/8$

17)  $1/3$

3)  $3/5$

6)  $3/5$

9)  $1/2$

12)  $4/5$

15)  $2/3$

18)  $1/3$

