

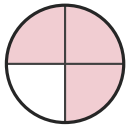
Write the Fraction

Name: _____

Date: _____

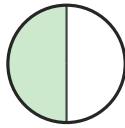
Write the fraction shown by each shaded shape. — Up to Eighths

1)



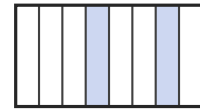
—

2)



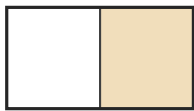
—

3)



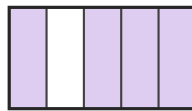
—

4)



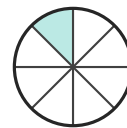
—

5)



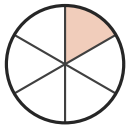
—

6)



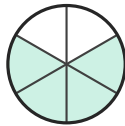
—

7)



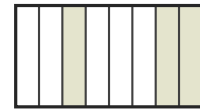
—

8)



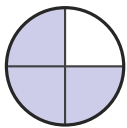
—

9)



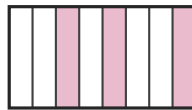
—

10)




—

11)



—

12)




—

13)



—

14)



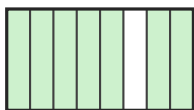
—

15)



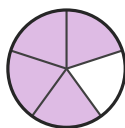
—

16)




—

17)



—

18)



—





Answer Key

1) $\frac{3}{4}$

4) $\frac{1}{2}$

7) $\frac{1}{6}$

10) $\frac{3}{4}$

13) $\frac{1}{5}$

16) $\frac{7}{8}$

2) $\frac{1}{2}$

5) $\frac{4}{5}$

8) $\frac{4}{6}$

11) $\frac{3}{8}$

14) $\frac{3}{4}$

17) $\frac{4}{5}$

3) $\frac{2}{8}$

6) $\frac{1}{8}$

9) $\frac{3}{8}$

12) $\frac{1}{2}$

15) $\frac{3}{5}$

18) $\frac{1}{2}$

