

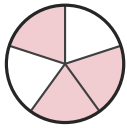
# Write the Fraction

Name: \_\_\_\_\_

Date: \_\_\_\_\_

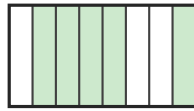
Write the fraction shown by each shaded shape. — Up to Eighths

1)



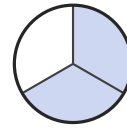
—

2)



—

3)



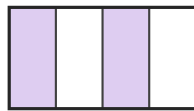
—

4)



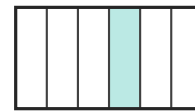
—

5)



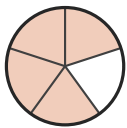
—

6)




—

7)



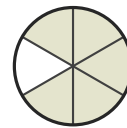
—

8)



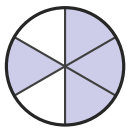
—

9)



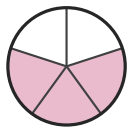
—

10)



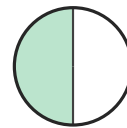
—

11)



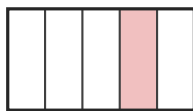
—

12)




—

13)



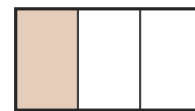
—

14)




—

15)



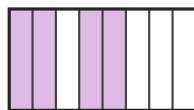
—

16)



—

17)



—

18)



—



## Answer Key

1)  $\frac{3}{5}$

4)  $\frac{1}{5}$

7)  $\frac{4}{5}$

10)  $\frac{4}{6}$

13)  $\frac{1}{5}$

16)  $\frac{1}{3}$

2)  $\frac{5}{8}$

5)  $\frac{2}{4}$

8)  $\frac{1}{2}$

11)  $\frac{3}{5}$

14)  $\frac{1}{3}$

17)  $\frac{4}{8}$

3)  $\frac{2}{3}$

6)  $\frac{1}{6}$

9)  $\frac{5}{6}$

12)  $\frac{1}{2}$

15)  $\frac{1}{3}$

18)  $\frac{1}{5}$

