


Identify the Shape

Name: _____

Date: _____


Look at each picture and circle the correct shape name — Basic Shapes

1)




- A. Circle
- B. Square
- C. Rectangle

2)



- A. Rectangle
- B. Square
- C. Triangle

3)




- A. Triangle
- B. Circle
- C. Rectangle

4)



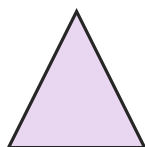
- A. Circle
- B. Rectangle
- C. Square

5)



- A. Triangle
- B. Circle
- C. Rectangle

6)



- A. Square
- B. Triangle
- C. Circle

7)




- A. Square
- B. Triangle
- C. Rectangle

8)



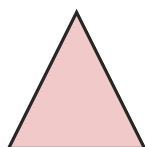
- A. Triangle
- B. Square
- C. Circle

9)




- A. Triangle
- B. Square
- C. Circle

10)



- A. Triangle
- B. Square
- C. Circle

11)



- A. Rectangle
- B. Circle
- C. Square

12)



- A. Square
- B. Rectangle
- C. Circle





Answer Key

1) B. Square

2) B. Square

3) B. Circle

4) B. Rectangle

5) B. Circle

6) B. Triangle

7) C. Rectangle

8) B. Square

9) A. Triangle

10) A. Triangle

11) B. Circle

12) A. Square

