


# Identify the Shape

Name: \_\_\_\_\_

Date: \_\_\_\_\_


Look at each picture and circle the correct shape name — Basic Shapes

1)



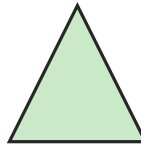
- A. Rectangle
- B. Triangle
- C. Square

2)



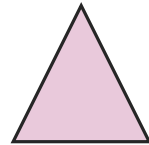
- A. Rectangle
- B. Circle
- C. Square

3)




- A. Triangle
- B. Rectangle
- C. Square

4)




- A. Circle
- B. Triangle
- C. Rectangle

5)



- A. Circle
- B. Triangle
- C. Rectangle

6)




- A. Triangle
- B. Square
- C. Rectangle

7)



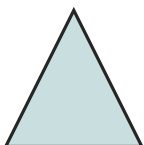
- A. Triangle
- B. Square
- C. Rectangle

8)




- A. Circle
- B. Triangle
- C. Square

9)



- A. Square
- B. Circle
- C. Triangle

10)



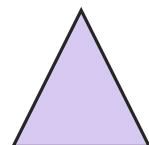
- A. Square
- B. Rectangle
- C. Triangle

11)



- A. Rectangle
- B. Triangle
- C. Circle

12)



- A. Triangle
- B. Circle
- C. Square





## Answer Key

- |                 |                  |                 |
|-----------------|------------------|-----------------|
| 1) C. Square    | 2) A. Rectangle  | 3) A. Triangle  |
| 4) B. Triangle  | 5) A. Circle     | 6) B. Square    |
| 7) C. Rectangle | 8) A. Circle     | 9) C. Triangle  |
| 10) A. Square   | 11) A. Rectangle | 12) A. Triangle |

