

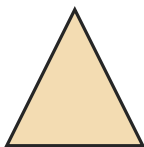
# Identify the Shape

Name: \_\_\_\_\_

Date: \_\_\_\_\_


Look at each picture and circle the correct shape name — Expanded 2D Shapes

1)



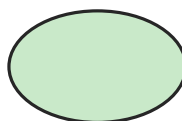
- A. Triangle
- B. Octagon
- C. Trapezoid

2)



- A. Triangle
- B. Square
- C. Oval

3)



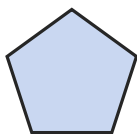
- A. Oval
- B. Trapezoid
- C. Hexagon

4)



- A. Rectangle
- B. Trapezoid
- C. Square

5)



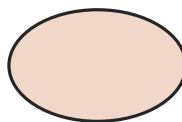
- A. Star
- B. Circle
- C. Pentagon

6)



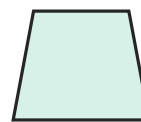
- A. Star
- B. Hexagon
- C. Octagon

7)



- A. Circle
- B. Pentagon
- C. Oval

8)



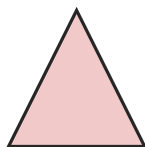
- A. Oval
- B. Rectangle
- C. Trapezoid

9)




- A. Hexagon
- B. Rectangle
- C. Star

10)




- A. Rectangle
- B. Hexagon
- C. Triangle

11)



- A. Hexagon
- B. Circle
- C. Trapezoid

12)



- A. Square
- B. Circle
- C. Star





## Answer Key

- |                 |                 |                 |
|-----------------|-----------------|-----------------|
| 1) A. Triangle  | 2) B. Square    | 3) A. Oval      |
| 4) A. Rectangle | 5) C. Pentagon  | 6) A. Star      |
| 7) C. Oval      | 8) C. Trapezoid | 9) B. Rectangle |
| 10) C. Triangle | 11) B. Circle   | 12) B. Circle   |