

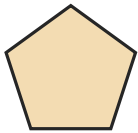
# Identify the Shape

Name: \_\_\_\_\_

Date: \_\_\_\_\_

Look at each picture and circle the correct shape name — Expanded 2D Shapes

1)



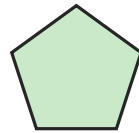
- A. Triangle
- B. Hexagon
- C. Pentagon

2)



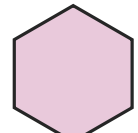
- A. Square
- B. Triangle
- C. Star

3)



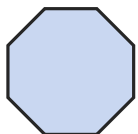
- A. Circle
- B. Square
- C. Pentagon

4)



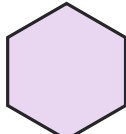
- A. Oval
- B. Star
- C. Hexagon

5)



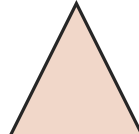
- A. Octagon
- B. Hexagon
- C. Rectangle

6)



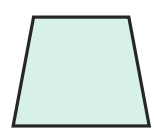
- A. Star
- B. Triangle
- C. Hexagon

7)



- A. Triangle
- B. Rectangle
- C. Octagon

8)



- A. Pentagon
- B. Circle
- C. Trapezoid

9)



- A. Star
- B. Square
- C. Rectangle

10)



- A. Pentagon
- B. Star
- C. Triangle

11)



- A. Triangle
- B. Oval
- C. Hexagon

12)



- A. Square
- B. Trapezoid
- C. Star





## Answer Key

1) C. Pentagon

4) C. Hexagon

7) A. Triangle

10) B. Star

2) C. Star

5) A. Octagon

8) C. Trapezoid

11) B. Oval

3) C. Pentagon

6) C. Hexagon

9) C. Rectangle

12) A. Square

