

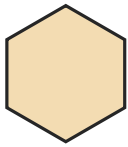
# Identify the Shape

Name: \_\_\_\_\_

Date: \_\_\_\_\_

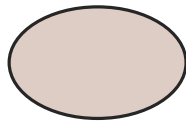
Look at each picture and circle the correct shape name — Expanded 2D Shapes

1)




- A. Rectangle
- B. Square
- C. Hexagon

2)



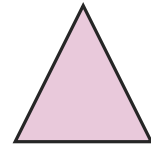
- A. Star
- B. Octagon
- C. Oval

3)




- A. Star
- B. Circle
- C. Hexagon

4)




- A. Pentagon
- B. Triangle
- C. Oval

5)



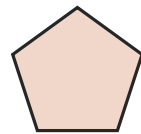
- A. Circle
- B. Octagon
- C. Square

6)



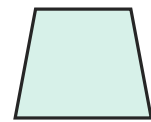
- A. Octagon
- B. Square
- C. Triangle

7)



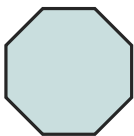
- A. Pentagon
- B. Square
- C. Oval

8)




- A. Triangle
- B. Oval
- C. Trapezoid

9)



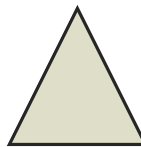
- A. Square
- B. Oval
- C. Octagon

10)



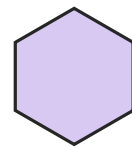
- A. Oval
- B. Octagon
- C. Rectangle

11)



- A. Hexagon
- B. Star
- C. Triangle

12)



- A. Pentagon
- B. Oval
- C. Hexagon





## Answer Key

1) C. Hexagon

4) B. Triangle

7) A. Pentagon

10) C. Rectangle

2) C. Oval

5) A. Circle

8) C. Trapezoid

11) C. Triangle

3) B. Circle

6) B. Square

9) C. Octagon

12) C. Hexagon

