


Identify the Shape

Name: _____

Date: _____


Look at each picture and circle the correct shape name — Quadrilaterals

1)



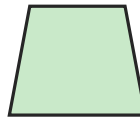
- A. Parallelogram
- B. Kite
- C. Rectangle

2)



- A. Trapezoid
- B. Parallelogram
- C. Square

3)




- A. Parallelogram
- B. Trapezoid
- C. Kite

4)



- A. Rectangle
- B. Rhombus
- C. Parallelogram

5)



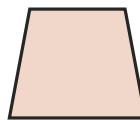
- A. Trapezoid
- B. Rhombus
- C. Kite

6)




- A. Parallelogram
- B. Rhombus
- C. Square

7)



- A. Rhombus
- B. Trapezoid
- C. Rectangle

8)




- A. Rhombus
- B. Parallelogram
- C. Kite

9)



- A. Trapezoid
- B. Square
- C. Rectangle

10)



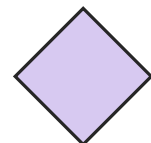
- A. Square
- B. Trapezoid
- C. Rectangle

11)



- A. Parallelogram
- B. Rectangle
- C. Kite

12)



- A. Trapezoid
- B. Rectangle
- C. Rhombus





Answer Key

- | | | |
|-----------------|----------------------|---------------------|
| 1) B. Kite | 2) C. Square | 3) B. Trapezoid |
| 4) A. Rectangle | 5) C. Kite | 6) A. Parallelogram |
| 7) B. Trapezoid | 8) A. Rhombus | 9) C. Rectangle |
| 10) A. Square | 11) A. Parallelogram | 12) C. Rhombus |