


# Identify the Shape

Name: \_\_\_\_\_

Date: \_\_\_\_\_


Look at each picture and circle the correct shape name — Quadrilaterals

1)



- A. Kite
- B. Rectangle
- C. Square

2)



- A. Trapezoid
- B. Rhombus
- C. Kite

3)



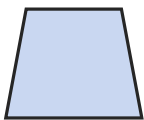
- A. Kite
- B. Rectangle
- C. Parallelogram

4)




- A. Parallelogram
- B. Rectangle
- C. Trapezoid

5)



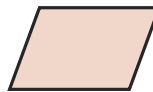
- A. Rhombus
- B. Trapezoid
- C. Kite

6)



- A. Parallelogram
- B. Square
- C. Rhombus

7)




- A. Rhombus
- B. Square
- C. Parallelogram

8)



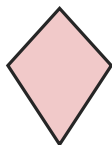
- A. Rectangle
- B. Trapezoid
- C. Rhombus

9)



- A. Square
- B. Parallelogram
- C. Kite

10)



- A. Kite
- B. Square
- C. Parallelogram

11)



- A. Rhombus
- B. Rectangle
- C. Trapezoid

12)



- A. Square
- B. Parallelogram
- C. Kite





## Answer Key

- |                     |                  |                 |
|---------------------|------------------|-----------------|
| 1) A. Kite          | 2) C. Kite       | 3) B. Rectangle |
| 4) B. Rectangle     | 5) B. Trapezoid  | 6) B. Square    |
| 7) C. Parallelogram | 8) A. Rectangle  | 9) A. Square    |
| 10) A. Kite         | 11) C. Trapezoid | 12) A. Square   |