

Identify the Shape

Name: _____

Date: _____


Look at each picture and circle the correct shape name — Quadrilaterals

1)




- A. Rhombus
- B. Parallelogram
- C. Rectangle

2)



- A. Kite
- B. Rhombus
- C. Rectangle

3)



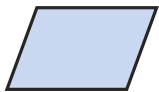
- A. Rectangle
- B. Kite
- C. Rhombus

4)




- A. Rectangle
- B. Trapezoid
- C. Parallelogram

5)




- A. Trapezoid
- B. Rectangle
- C. Parallelogram

6)



- A. Rhombus
- B. Kite
- C. Rectangle

7)




- A. Square
- B. Rectangle
- C. Kite

8)



- A. Square
- B. Parallelogram
- C. Trapezoid

9)



- A. Rhombus
- B. Rectangle
- C. Kite

10)



- A. Rectangle
- B. Trapezoid
- C. Parallelogram

11)



- A. Rectangle
- B. Trapezoid
- C. Rhombus

12)



- A. Square
- B. Parallelogram
- C. Trapezoid





Answer Key

- | | | |
|---------------------|---------------------|------------------|
| 1) B. Parallelogram | 2) C. Rectangle | 3) B. Kite |
| 4) A. Rectangle | 5) C. Parallelogram | 6) B. Kite |
| 7) A. Square | 8) B. Parallelogram | 9) C. Kite |
| 10) A. Rectangle | 11) B. Trapezoid | 12) C. Trapezoid |

