

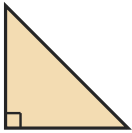
Identify the Shape

Name: _____

Date: _____

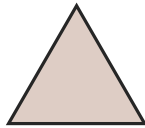
Look at each picture and circle the correct shape name — Triangle Classification

1)




- A. Right Triangle
- B. Scalene Triangle
- C. Acute Triangle

2)



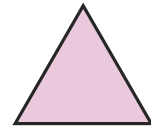
- A. Scalene Triangle
- B. Equilateral Triangle
- C. Acute Triangle

3)



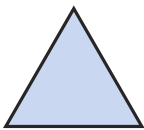
- A. Right Triangle
- B. Equilateral Triangle
- C. Scalene Triangle

4)



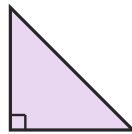
- A. Right Triangle
- B. Equilateral Triangle
- C. Scalene Triangle

5)



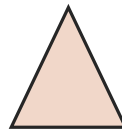
- A. Scalene Triangle
- B. Equilateral Triangle
- C. Right Triangle

6)



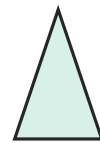
- A. Isosceles Triangle
- B. Scalene Triangle
- C. Right Triangle

7)




- A. Right Triangle
- B. Scalene Triangle
- C. Acute Triangle

8)



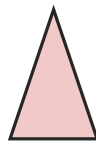
- A. Obtuse Triangle
- B. Scalene Triangle
- C. Isosceles Triangle

9)



- A. Equilateral Triangle
- B. Scalene Triangle
- C. Right Triangle

10)



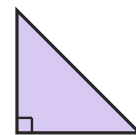
- A. Obtuse Triangle
- B. Equilateral Triangle
- C. Isosceles Triangle

11)



- A. Right Triangle
- B. Acute Triangle
- C. Scalene Triangle

12)



- A. Right Triangle
- B. Scalene Triangle
- C. Isosceles Triangle





Answer Key

- | | | |
|----------------------------|----------------------------|------------------------|
| 1) A. Right Triangle | 2) B. Equilateral Triangle | 3) C. Scalene Triangle |
| 4) B. Equilateral Triangle | 5) B. Equilateral Triangle | 6) C. Right Triangle |
| 7) C. Acute Triangle | 8) C. Isosceles Triangle | 9) B. Scalene Triangle |
| 10) C. Isosceles Triangle | 11) B. Acute Triangle | 12) A. Right Triangle |

