


Identify the Shape

Name: _____

Date: _____


Look at each picture and circle the correct shape name — Triangle Classification

1)



- A. Scalene Triangle
- B. Isosceles Triangle
- C. Obtuse Triangle

2)



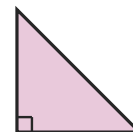
- A. Right Triangle
- B. Acute Triangle
- C. Scalene Triangle

3)



- A. Scalene Triangle
- B. Isosceles Triangle
- C. Right Triangle

4)



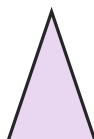
- A. Right Triangle
- B. Obtuse Triangle
- C. Acute Triangle

5)




- A. Isosceles Triangle
- B. Acute Triangle
- C. Right Triangle

6)



- A. Right Triangle
- B. Obtuse Triangle
- C. Isosceles Triangle

7)



- A. Scalene Triangle
- B. Acute Triangle
- C. Right Triangle

8)



- A. Right Triangle
- B. Equilateral Triangle
- C. Acute Triangle

9)



- A. Scalene Triangle
- B. Equilateral Triangle
- C. Obtuse Triangle

10)



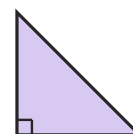
- A. Acute Triangle
- B. Right Triangle
- C. Obtuse Triangle

11)



- A. Equilateral Triangle
- B. Right Triangle
- C. Obtuse Triangle

12)



- A. Right Triangle
- B. Obtuse Triangle
- C. Scalene Triangle





Answer Key

- | | | |
|------------------------|----------------------------|--------------------------|
| 1) A. Scalene Triangle | 2) C. Scalene Triangle | 3) B. Isosceles Triangle |
| 4) A. Right Triangle | 5) B. Acute Triangle | 6) C. Isosceles Triangle |
| 7) A. Scalene Triangle | 8) B. Equilateral Triangle | 9) C. Obtuse Triangle |
| 10) C. Obtuse Triangle | 11) C. Obtuse Triangle | 12) A. Right Triangle |

