





































Identify the Shape

Name: _____

Date: _____

Read each description and circle the matching shape — Shape Properties

- 1) **8 sides**
- _____
- A. 
- B. 
- C. 
- 2) **Round shape with no corners**
- _____
- A. 
- B. 
- C. 
- 3) **Exactly 2 equal sides**
- _____
- A. 
- B. 
- C. 
- 4) **10 sides**
- _____
- A. 
- B. 
- C. 
- 5) **No equal sides**
- _____
- A. 
- B. 
- C. 
- 6) **Exactly 1 pair of parallel sides**
- _____
- A. 
- B. 
- C. 
- 7) **0 sides and 0 vertices**
- _____
- A. 
- B. 
- C. 
- 8) **5 sides**
- _____
- A. 
- B. 
- C. 
- 9) **3 equal sides and 3 equal angles**
- _____
- A. 
- B. 
- C. 
- 10) **One angle greater than 90°**
- _____
- A. 
- B. 
- C. 
- 11) **6 sides**
- _____
- A. 
- B. 
- C. 
- 12) **4 right angles; opposite sides equal**
- _____
- A. 
- B. 
- C. 



Answer Key

- | | | |
|------------------------|------------------------|----------------------------|
| 1) B. Octagon | 2) A. Circle | 3) C. Isosceles Triangle |
| 4) A. Decagon | 5) A. Scalene Triangle | 6) B. Trapezoid |
| 7) B. Circle | 8) C. Pentagon | 9) B. Equilateral Triangle |
| 10) B. Obtuse Triangle | 11) C. Hexagon | 12) A. Rectangle |

