

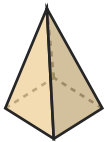
Identify the Shape

Name: _____

Date: _____

Look at each picture and circle the correct shape name — 3D Solids

1)



- A. Square Pyramid
- B. Triangular Prism
- C. Triangular Pyramid

2)



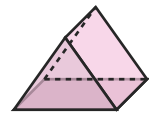
- A. Cone
- B. Cylinder
- C. Rectangular Prism

3)




- A. Triangular Prism
- B. Square Pyramid
- C. Cone

4)



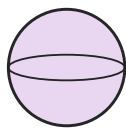
- A. Triangular Prism
- B. Rectangular Prism
- C. Cone

5)



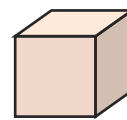
- A. Triangular Pyramid
- B. Cylinder
- C. Cube

6)



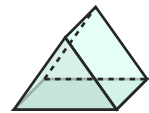
- A. Sphere
- B. Square Pyramid
- C. Triangular Pyramid

7)



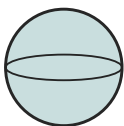
- A. Rectangular Prism
- B. Sphere
- C. Cube

8)



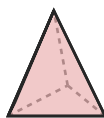
- A. Sphere
- B. Triangular Prism
- C. Cone

9)



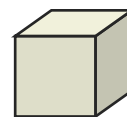
- A. Cone
- B. Sphere
- C. Triangular Pyramid

10)



- A. Triangular Pyramid
- B. Cylinder
- C. Square Pyramid

11)



- A. Cone
- B. Cube
- C. Cylinder

12)



- A. Square Pyramid
- B. Sphere
- C. Triangular Pyramid





Answer Key

- | | | |
|---------------------------|------------------------|---------------------------|
| 1) A. Square Pyramid | 2) A. Cone | 3) C. Cone |
| 4) A. Triangular Prism | 5) B. Cylinder | 6) A. Sphere |
| 7) C. Cube | 8) B. Triangular Prism | 9) B. Sphere |
| 10) A. Triangular Pyramid | 11) B. Cube | 12) C. Triangular Pyramid |