

Identify the Shape

Name: _____

Date: _____

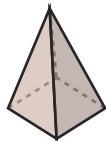
Look at each picture and circle the correct shape name — 3D Solids

1)



- A. Cone
- B. Triangular Prism
- C. Sphere

2)



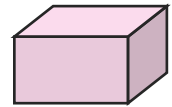
- A. Sphere
- B. Cube
- C. Square Pyramid

3)



- A. Square Pyramid
- B. Sphere
- C. Cylinder

4)



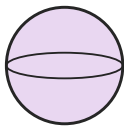
- A. Rectangular Prism
- B. Cylinder
- C. Sphere

5)



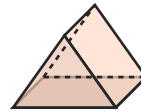
- A. Triangular Prism
- B. Triangular Pyramid
- C. Cube

6)



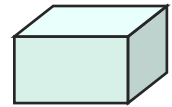
- A. Cube
- B. Triangular Pyramid
- C. Sphere

7)



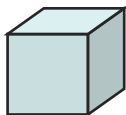
- A. Triangular Prism
- B. Sphere
- C. Rectangular Prism

8)



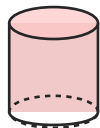
- A. Cone
- B. Rectangular Prism
- C. Square Pyramid

9)



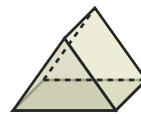
- A. Cube
- B. Rectangular Prism
- C. Square Pyramid

10)



- A. Cube
- B. Sphere
- C. Cylinder

11)



- A. Cone
- B. Square Pyramid
- C. Triangular Prism

12)



- A. Triangular Pyramid
- B. Square Pyramid
- C. Triangular Prism





Answer Key

- | | | |
|-------------------------|--------------------------|---------------------------|
| 1) A. Cone | 2) C. Square Pyramid | 3) C. Cylinder |
| 4) A. Rectangular Prism | 5) B. Triangular Pyramid | 6) C. Sphere |
| 7) A. Triangular Prism | 8) B. Rectangular Prism | 9) A. Cube |
| 10) C. Cylinder | 11) C. Triangular Prism | 12) A. Triangular Pyramid |