

Identify the Shape

Name: _____

Date: _____

Look at each picture and circle the correct shape name — 3D Solids

1)



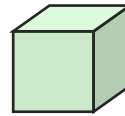
- A. Triangular Pyramid
- B. Sphere
- C. Cylinder

2)



- A. Triangular Prism
- B. Cube
- C. Triangular Pyramid

3)



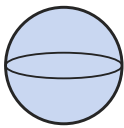
- A. Triangular Prism
- B. Cube
- C. Cylinder

4)



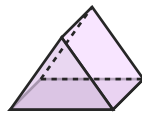
- A. Cone
- B. Square Pyramid
- C. Cylinder

5)



- A. Sphere
- B. Cone
- C. Square Pyramid

6)



- A. Triangular Pyramid
- B. Sphere
- C. Triangular Prism

7)



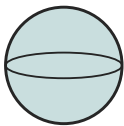
- A. Sphere
- B. Cone
- C. Triangular Pyramid

8)



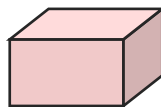
- A. Square Pyramid
- B. Sphere
- C. Cube

9)



- A. Sphere
- B. Square Pyramid
- C. Cylinder

10)



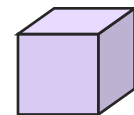
- A. Rectangular Prism
- B. Triangular Pyramid
- C. Cube

11)



- A. Cylinder
- B. Triangular Pyramid
- C. Cube

12)



- A. Cube
- B. Sphere
- C. Rectangular Prism





Answer Key

- | | | |
|--------------------------|--------------------------|------------------------|
| 1) A. Triangular Pyramid | 2) C. Triangular Pyramid | 3) B. Cube |
| 4) C. Cylinder | 5) A. Sphere | 6) C. Triangular Prism |
| 7) B. Cone | 8) A. Square Pyramid | 9) A. Sphere |
| 10) A. Rectangular Prism | 11) A. Cylinder | 12) A. Cube |

