

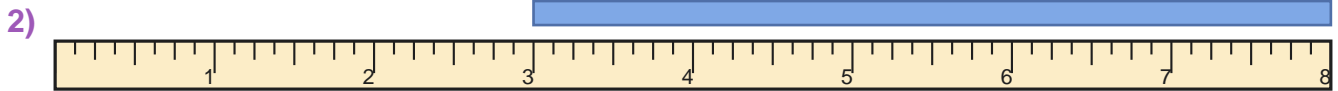
Read the Ruler

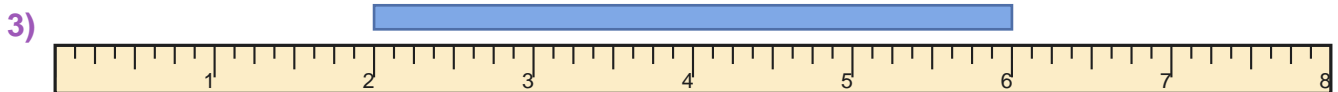
Name: _____

Date: _____

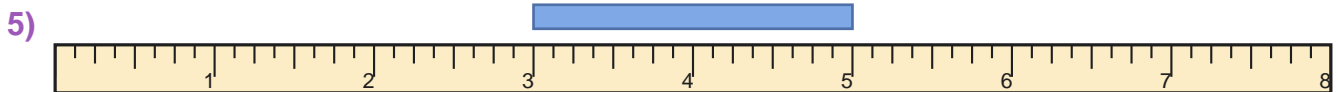
Measure the blue bar on each ruler and write the length in inches — Whole Inches



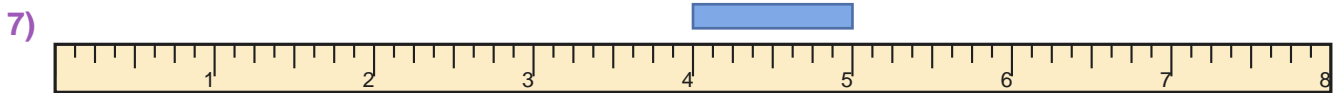




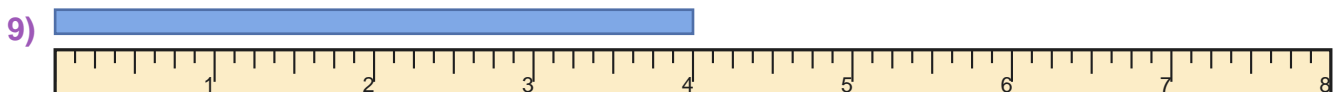
















Answer Key

1) 4 inches

3) 4 inches

5) 2 inches

7) 1 inches

9) 4 inches

2) 5 inches

4) 2 inches

6) 1 inches

8) 2 inches

10) 2 inches

