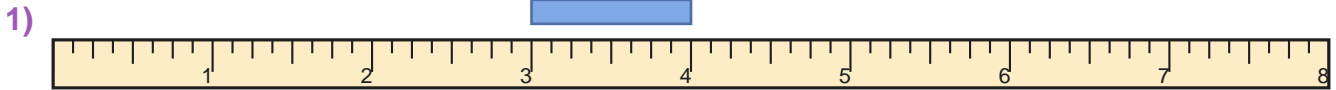


# Read the Ruler

Name: \_\_\_\_\_

Date: \_\_\_\_\_

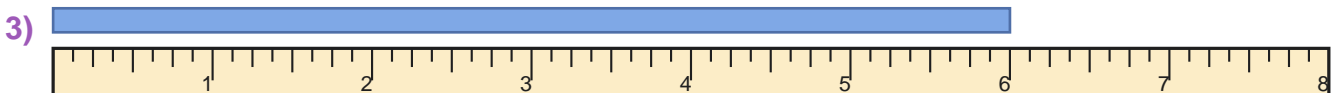
Measure the blue bar on each ruler and write the length in inches — Whole Inches



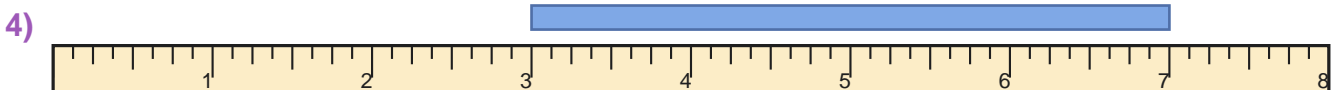
\_\_\_\_\_



\_\_\_\_\_



\_\_\_\_\_



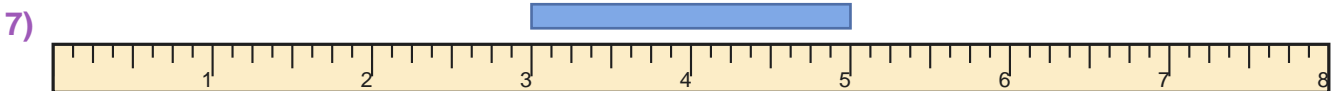
\_\_\_\_\_



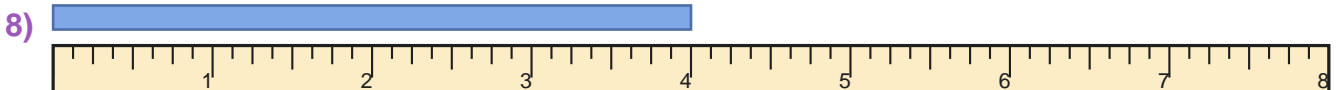
\_\_\_\_\_



\_\_\_\_\_



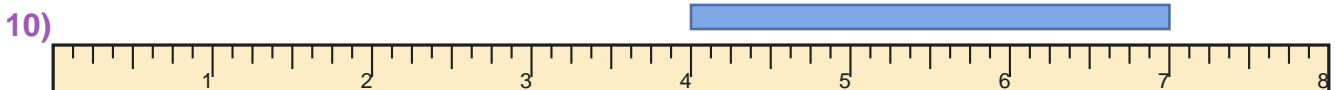
\_\_\_\_\_



\_\_\_\_\_



\_\_\_\_\_



\_\_\_\_\_



## Answer Key

1) 1 inches

3) 6 inches

5) 2 inches

7) 2 inches

9) 2 inches

2) 4 inches

4) 4 inches

6) 2 inches

8) 4 inches

10) 3 inches