

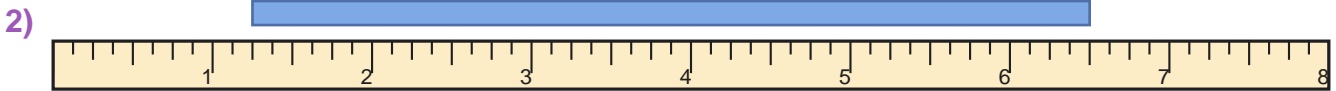
Read the Ruler

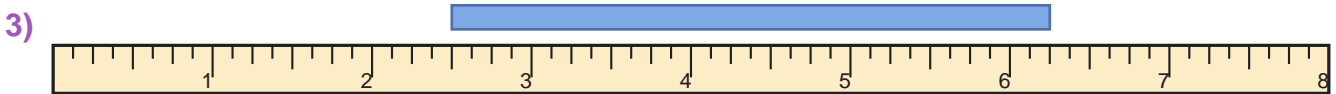
Name: _____

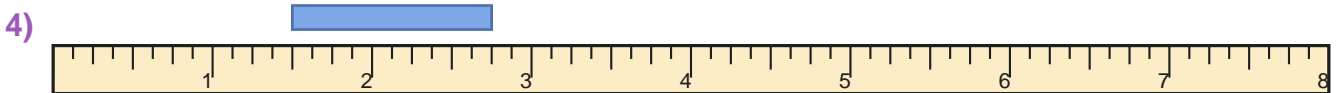
Date: _____

Measure the blue bar on each ruler and write the length in inches — Quarter Inches

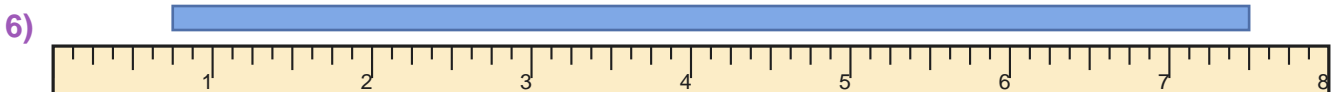


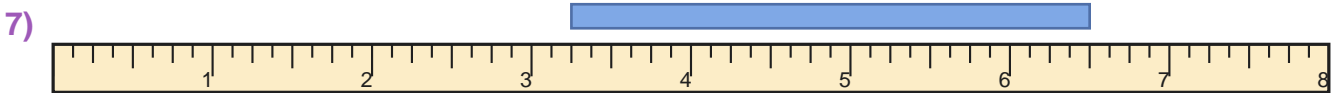


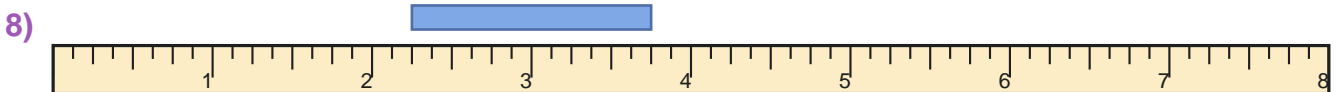


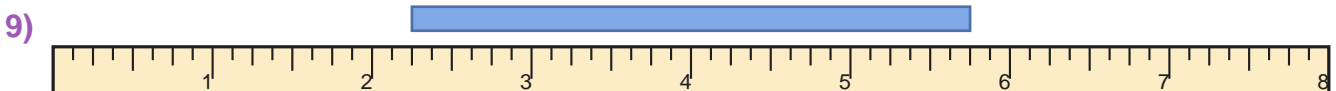
















Answer Key

1) 2 1/4 inches

3) 3 3/4 inches

5) 1 1/2 inches

7) 3 1/4 inches

9) 3 1/2 inches

2) 5 1/4 inches

4) 1 1/4 inches

6) 6 3/4 inches

8) 1 1/2 inches

10) 2 1/2 inches