

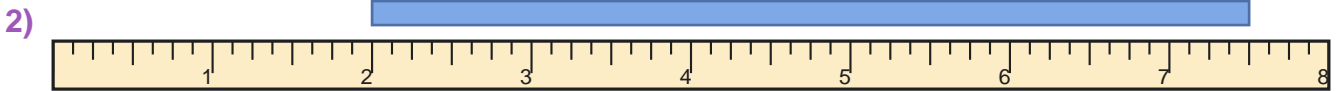
Read the Ruler

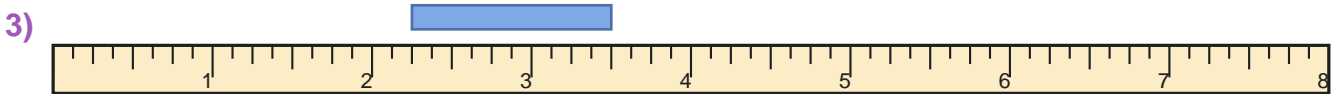
Name: _____

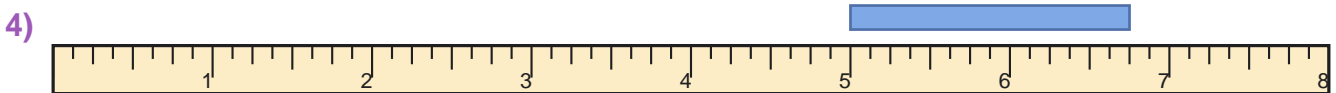
Date: _____

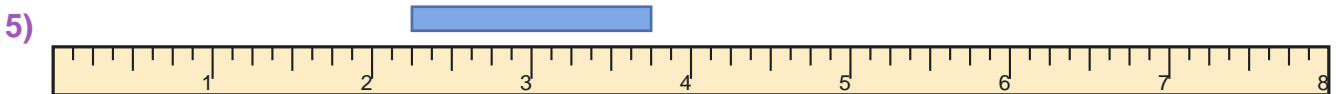
Measure the blue bar on each ruler and write the length in inches — Quarter Inches

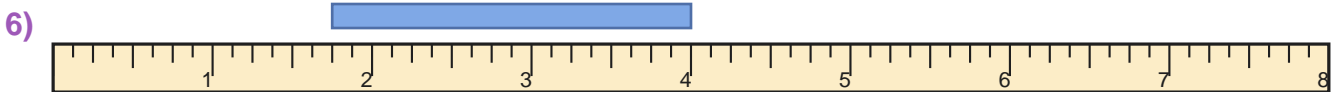


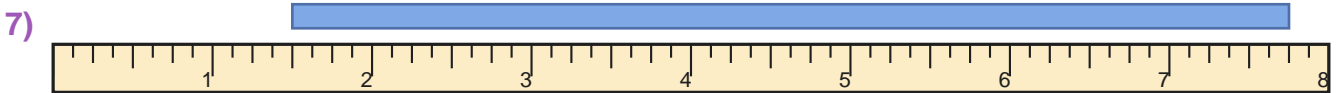


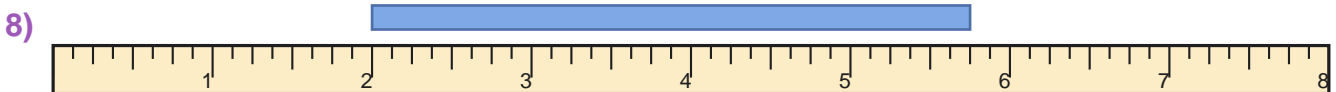


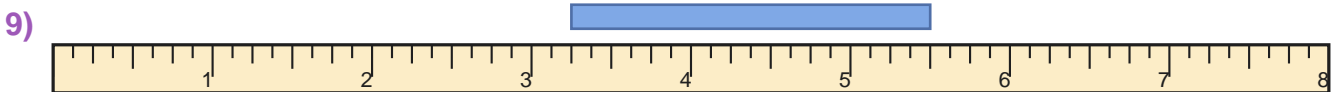


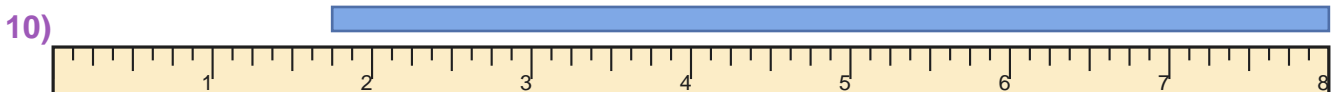














Answer Key

1) $2 \frac{1}{4}$ inches

3) $1 \frac{1}{4}$ inches

5) $1 \frac{1}{2}$ inches

7) $6 \frac{1}{4}$ inches

9) $2 \frac{1}{4}$ inches

2) $5 \frac{1}{2}$ inches

4) $1 \frac{3}{4}$ inches

6) $2 \frac{1}{4}$ inches

8) $3 \frac{3}{4}$ inches

10) $6 \frac{1}{4}$ inches