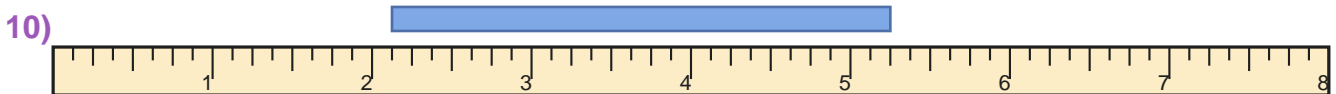
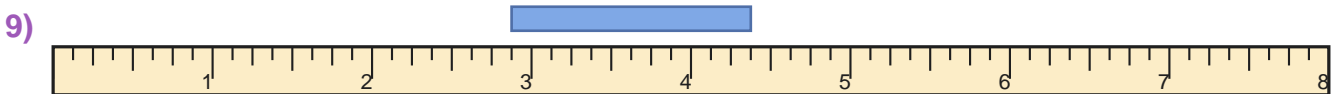
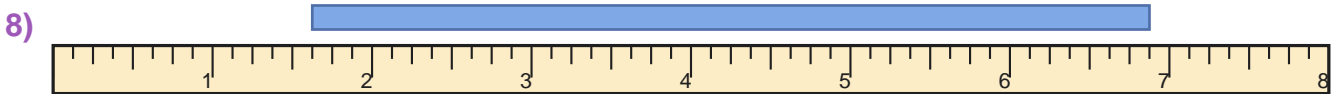
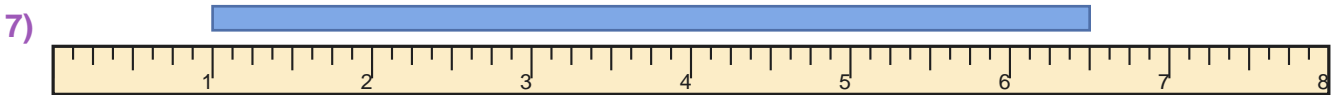
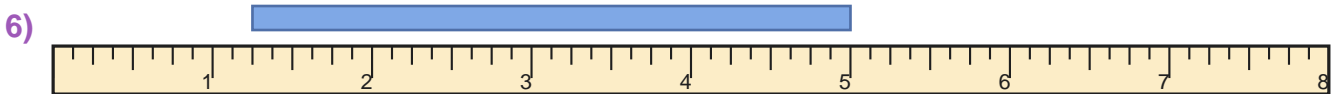
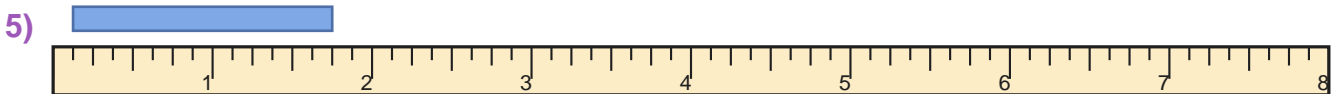
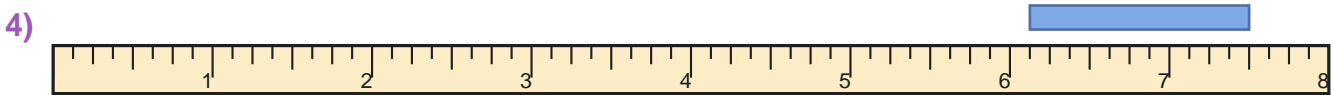
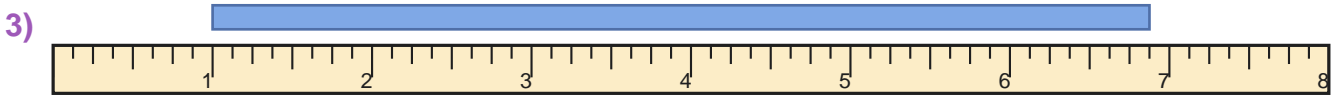
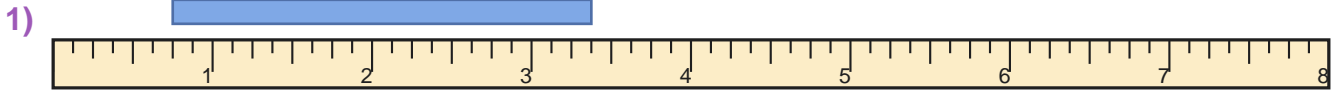


Read the Ruler

Name: _____

Date: _____

Measure the blue bar on each ruler and write the length in inches — Eighth Inches





Answer Key

1) $2 \frac{5}{8}$ inches

3) $5 \frac{7}{8}$ inches

5) $1 \frac{5}{8}$ inches

7) $5 \frac{1}{2}$ inches

9) $1 \frac{1}{2}$ inches

2) $2 \frac{3}{4}$ inches

4) $1 \frac{3}{8}$ inches

6) $3 \frac{3}{4}$ inches

8) $5 \frac{1}{4}$ inches

10) $3 \frac{1}{8}$ inches

