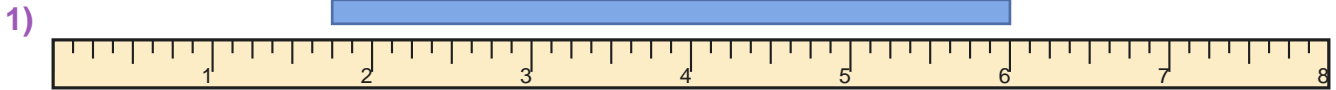


Read the Ruler

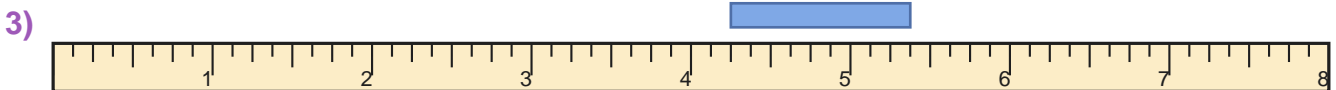
Name: _____

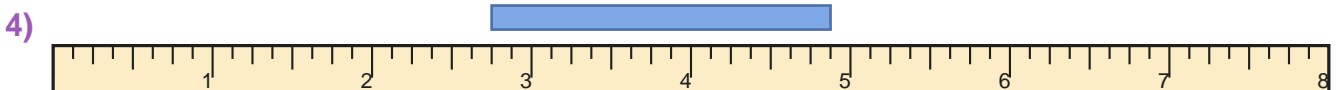
Date: _____

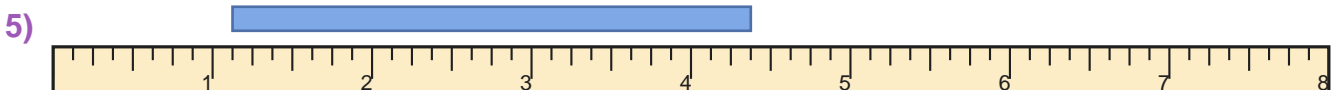
Measure the blue bar on each ruler and write the length in inches — Eighth Inches



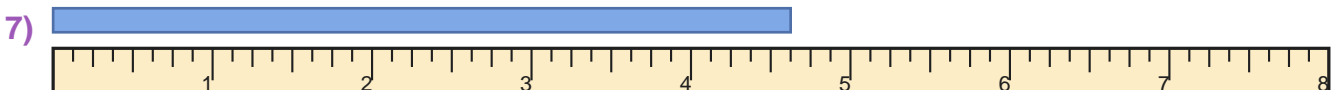


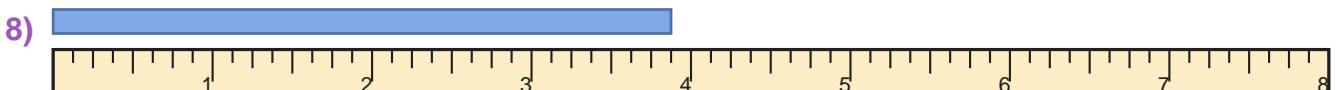




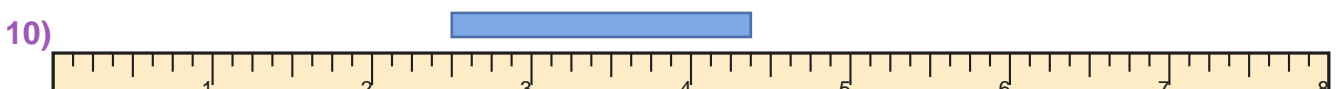














Answer Key

1) $4 \frac{1}{4}$ inches

3) $1 \frac{1}{8}$ inches

5) $3 \frac{1}{4}$ inches

7) $4 \frac{5}{8}$ inches

9) $1 \frac{1}{2}$ inches

2) $3 \frac{1}{2}$ inches

4) $2 \frac{1}{8}$ inches

6) $5 \frac{7}{8}$ inches

8) $3 \frac{7}{8}$ inches

10) $1 \frac{7}{8}$ inches