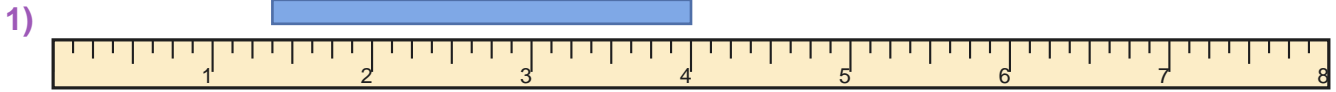


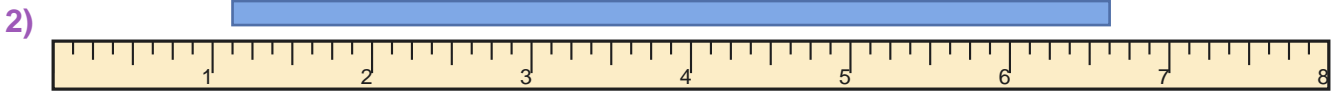
Read the Ruler

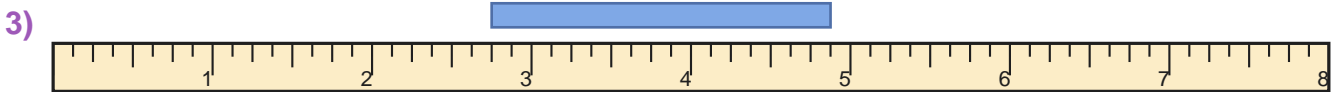
Name: _____

Date: _____

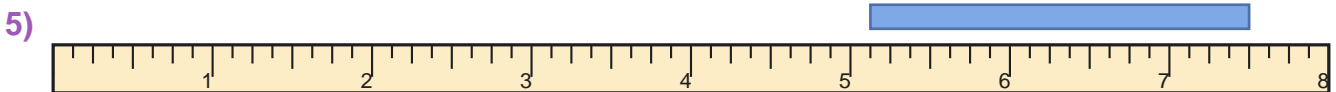
Measure the blue bar on each ruler and write the length in inches — Eighth Inches

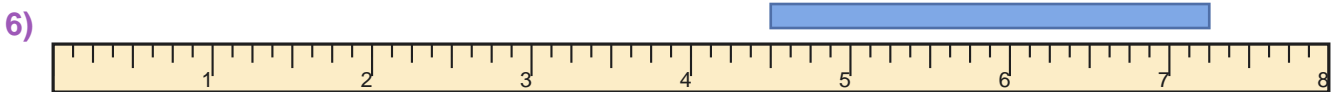


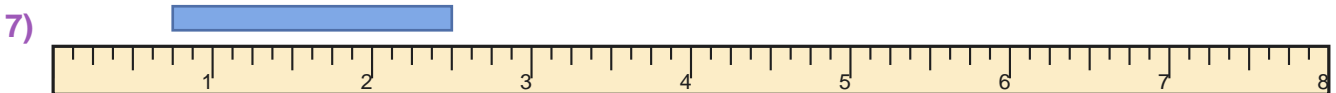


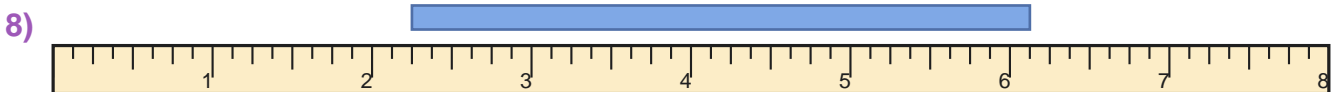


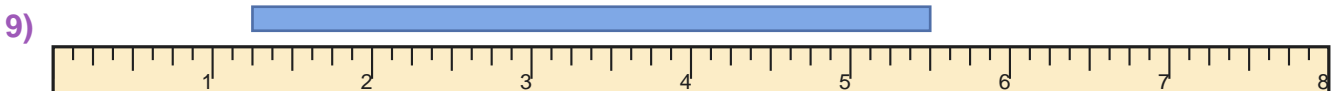
















Answer Key

1) $2 \frac{5}{8}$ inches

3) $2 \frac{1}{8}$ inches

5) $2 \frac{3}{8}$ inches

7) $1 \frac{3}{4}$ inches

9) $4 \frac{1}{4}$ inches

2) $5 \frac{1}{2}$ inches

4) $2 \frac{1}{8}$ inches

6) $2 \frac{3}{4}$ inches

8) $3 \frac{7}{8}$ inches

10) $3 \frac{3}{8}$ inches