

Multiplication on Number Lines

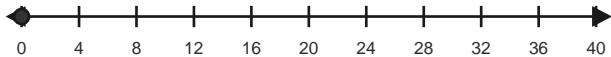
Name: _____

Date: _____

Use equal jumps on the number line to solve each equation. - Equal Jumps to 20

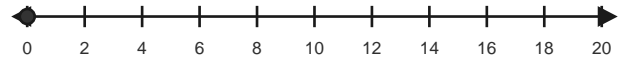
1) $2 \times 4 = \underline{\quad}$

Make 2 equal hops of 4.



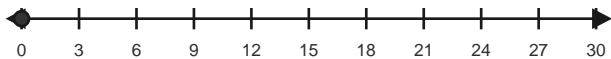
2) $4 \times 2 = \underline{\quad}$

Make 4 equal hops of 2.



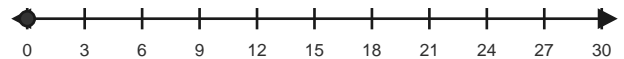
3) $4 \times 3 = \underline{\quad}$

Make 4 equal hops of 3.



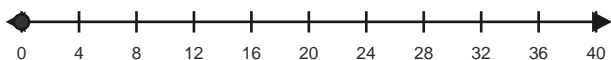
4) $5 \times 3 = \underline{\quad}$

Make 5 equal hops of 3.



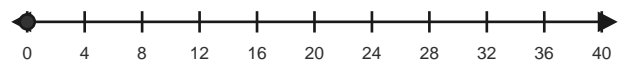
5) $4 \times 4 = \underline{\quad}$

Make 4 equal hops of 4.



6) $5 \times 4 = \underline{\quad}$

Make 5 equal hops of 4.

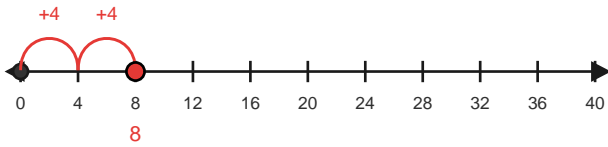


Answer Key

The red hops show one correct way to solve each multiplication equation. - Equal Jumps to 20

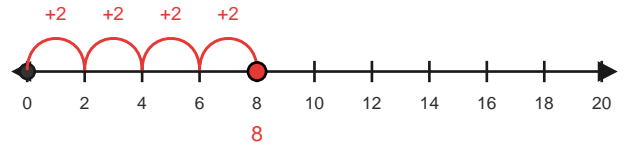
1) $2 \times 4 = 8$

Make 2 equal hops of 4.



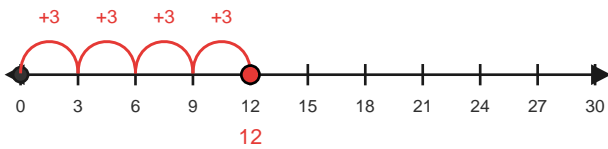
2) $4 \times 2 = 8$

Make 4 equal hops of 2.



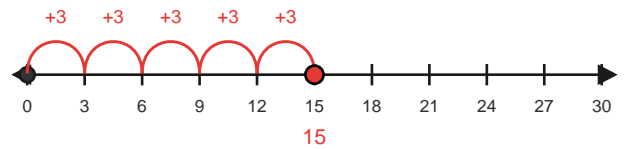
3) $4 \times 3 = 12$

Make 4 equal hops of 3.



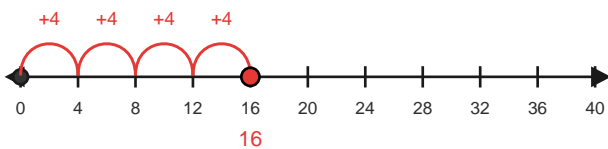
4) $5 \times 3 = 15$

Make 5 equal hops of 3.



5) $4 \times 4 = 16$

Make 4 equal hops of 4.



6) $5 \times 4 = 20$

Make 5 equal hops of 4.

