

# Multiplication on Number Lines

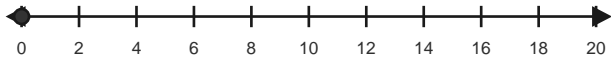
Name: \_\_\_\_\_

Date: \_\_\_\_\_

Use equal jumps on the number line to solve each equation. - Equal Jumps to 36

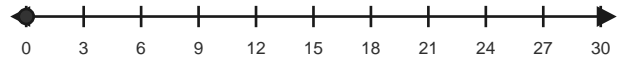
1)  $4 \times 2 = \underline{\quad}$

Make 4 equal hops of 2.



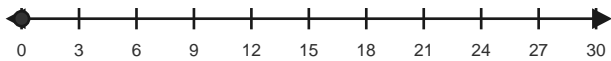
2)  $3 \times 3 = \underline{\quad}$

Make 3 equal hops of 3.



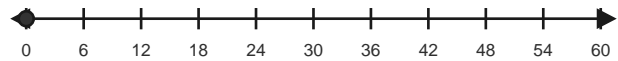
3)  $4 \times 3 = \underline{\quad}$

Make 4 equal hops of 3.



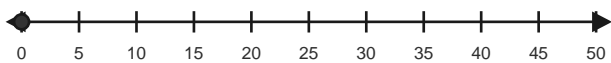
4)  $3 \times 6 = \underline{\quad}$

Make 3 equal hops of 6.



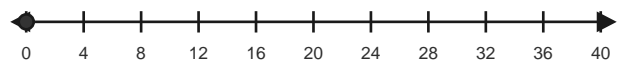
5)  $4 \times 5 = \underline{\quad}$

Make 4 equal hops of 5.



6)  $6 \times 4 = \underline{\quad}$

Make 6 equal hops of 4.

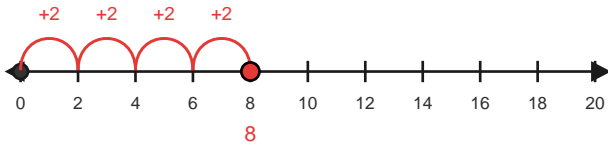


# Answer Key

The red hops show one correct way to solve each multiplication equation. - Equal Jumps to 36

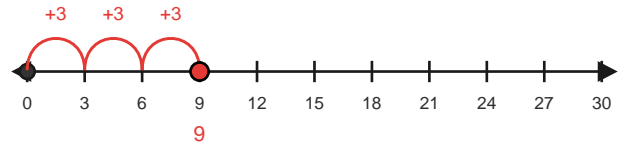
1)  $4 \times 2 = 8$

Make 4 equal hops of 2.



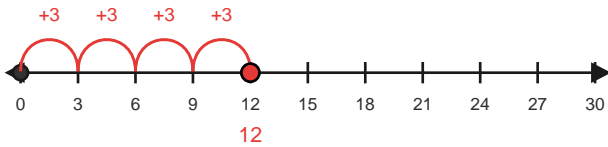
2)  $3 \times 3 = 9$

Make 3 equal hops of 3.



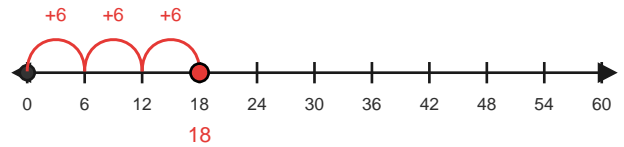
3)  $4 \times 3 = 12$

Make 4 equal hops of 3.



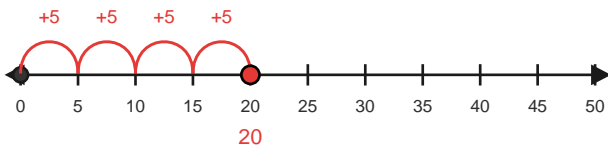
4)  $3 \times 6 = 18$

Make 3 equal hops of 6.



5)  $4 \times 5 = 20$

Make 4 equal hops of 5.



6)  $6 \times 4 = 24$

Make 6 equal hops of 4.

