

Multiplication on Number Lines

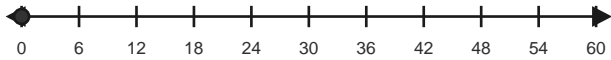
Name: _____

Date: _____

Use equal jumps on the number line to solve each equation. - Equal Jumps to 81

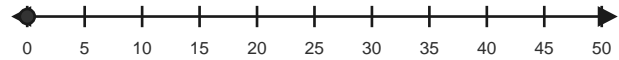
1) $4 \times 6 = \underline{\quad}$

Make 4 equal hops of 6.



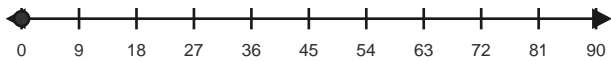
2) $6 \times 5 = \underline{\quad}$

Make 6 equal hops of 5.



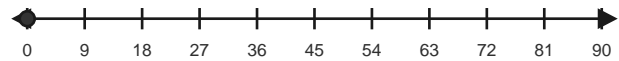
3) $4 \times 9 = \underline{\quad}$

Make 4 equal hops of 9.



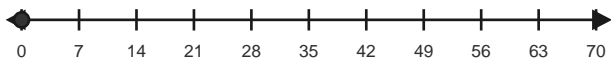
4) $5 \times 9 = \underline{\quad}$

Make 5 equal hops of 9.



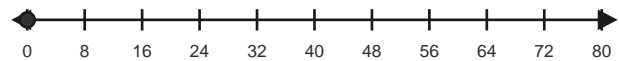
5) $7 \times 7 = \underline{\quad}$

Make 7 equal hops of 7.



6) $7 \times 8 = \underline{\quad}$

Make 7 equal hops of 8.

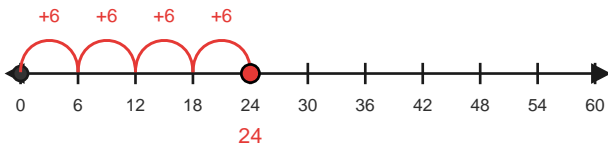


Answer Key

The red hops show one correct way to solve each multiplication equation. - Equal Jumps to 81

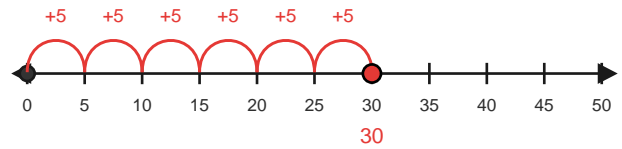
1) $4 \times 6 = 24$

Make 4 equal hops of 6.



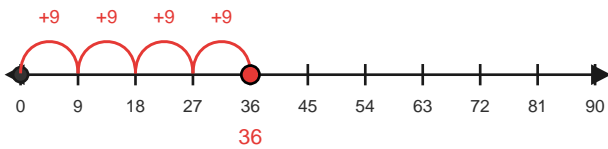
2) $6 \times 5 = 30$

Make 6 equal hops of 5.



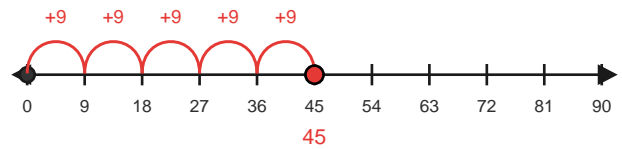
3) $4 \times 9 = 36$

Make 4 equal hops of 9.



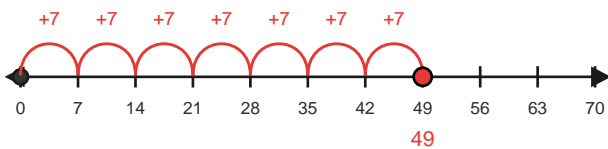
4) $5 \times 9 = 45$

Make 5 equal hops of 9.



5) $7 \times 7 = 49$

Make 7 equal hops of 7.



6) $7 \times 8 = 56$

Make 7 equal hops of 8.

