

# Multiplication on Number Lines

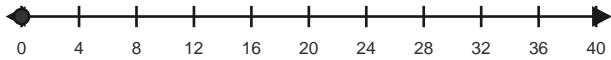
Name: \_\_\_\_\_

Date: \_\_\_\_\_

Use equal jumps on the number line to solve each equation. - Equal Jumps to 81

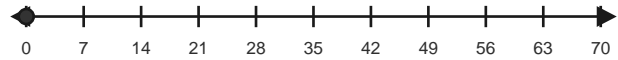
1)  $5 \times 4 = \underline{\quad}$

Make 5 equal hops of 4.



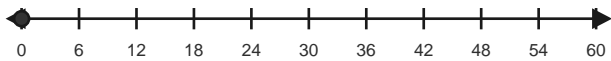
2)  $4 \times 7 = \underline{\quad}$

Make 4 equal hops of 7.



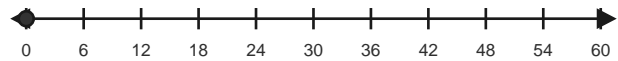
3)  $5 \times 6 = \underline{\quad}$

Make 5 equal hops of 6.



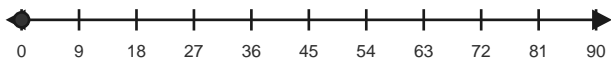
4)  $7 \times 6 = \underline{\quad}$

Make 7 equal hops of 6.



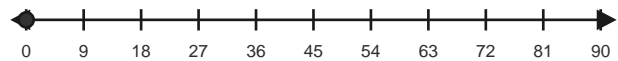
5)  $5 \times 9 = \underline{\quad}$

Make 5 equal hops of 9.



6)  $7 \times 9 = \underline{\quad}$

Make 7 equal hops of 9.

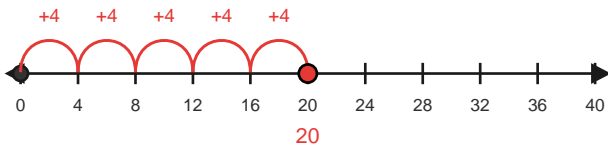


# Answer Key

The red hops show one correct way to solve each multiplication equation. - Equal Jumps to 81

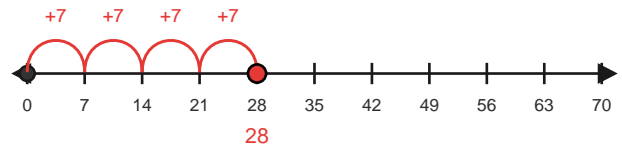
1)  $5 \times 4 = 20$

Make 5 equal hops of 4.



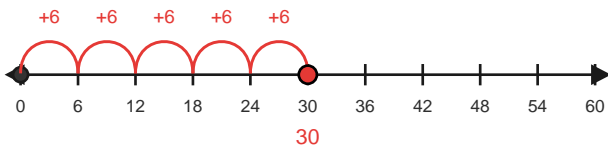
2)  $4 \times 7 = 28$

Make 4 equal hops of 7.



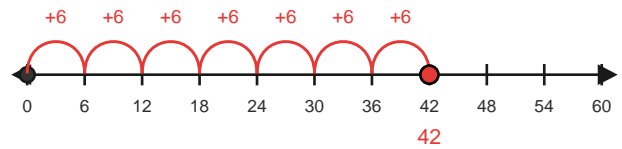
3)  $5 \times 6 = 30$

Make 5 equal hops of 6.



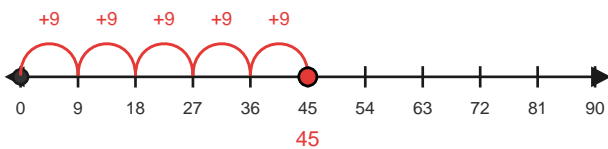
4)  $7 \times 6 = 42$

Make 7 equal hops of 6.



5)  $5 \times 9 = 45$

Make 5 equal hops of 9.



6)  $7 \times 9 = 63$

Make 7 equal hops of 9.

