

Visual Multiplication

Name: _____

Date: _____

Count the groups and multiply to find the total — Multiplication with Pictures (up to 24)



$3 \times 2 = \underline{\quad}$



$2 \times 3 = \underline{\quad}$



$4 \times 2 = \underline{\quad}$



$2 \times 4 = \underline{\quad}$




$3 \times 3 = \underline{\quad}$



$6 \times 2 = \underline{\quad}$




$4 \times 3 = \underline{\quad}$




$3 \times 4 = \underline{\quad}$



$5 \times 3 = \underline{\quad}$



$4 \times 4 = \underline{\quad}$



$5 \times 4 = \underline{\quad}$



$6 \times 4 = \underline{\quad}$