


Visual Multiplication

Name: _____

Date: _____

Count the groups and multiply to find the total — Multiplication with Shapes (up to 48)



$3 \times 5 = \underline{\quad}$



$6 \times 3 = \underline{\quad}$




$7 \times 3 = \underline{\quad}$




$8 \times 3 = \underline{\quad}$




$4 \times 6 = \underline{\quad}$




$7 \times 4 = \underline{\quad}$



$8 \times 4 = \underline{\quad}$



$7 \times 5 = \underline{\quad}$



$8 \times 6 = \underline{\quad}$

