

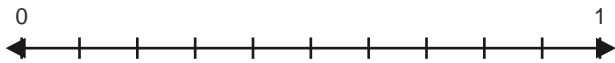
# Decimals on Number Lines

Name: \_\_\_\_\_

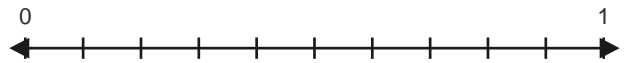
Date: \_\_\_\_\_

Express each decimal on the number lines. Draw the zoom lines and place the point yourself. — Tenths on Number Lines

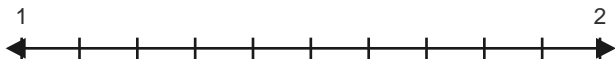
1) **0.3**



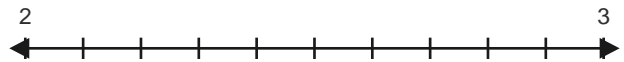
2) **0.4**



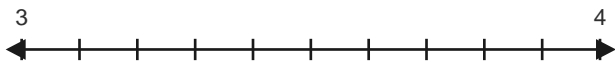
3) **1.7**



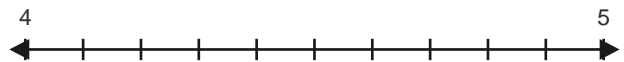
4) **2.5**



5) **3.6**



6) **4.2**



7) **6.7**



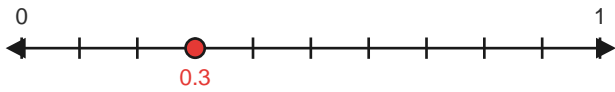
8) **7.5**



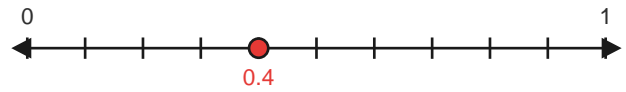
# Answer Key

The red guide lines show how each decimal zooms into its exact place on the number lines. — Tenths on Number Lines

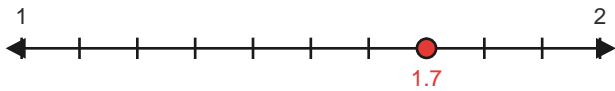
1) 0.3



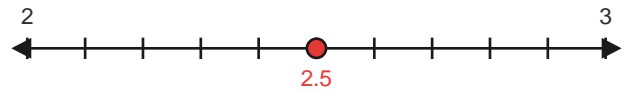
2) 0.4



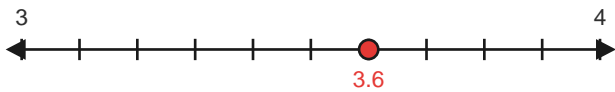
3) 1.7



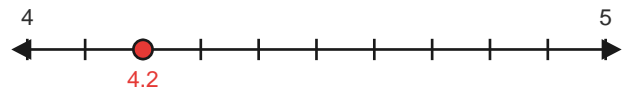
4) 2.5



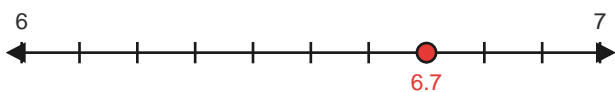
5) 3.6



6) 4.2



7) 6.7



8) 7.5

