

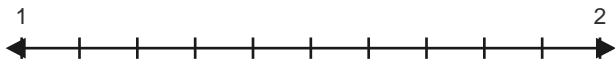
Decimals on Number Lines

Name: _____

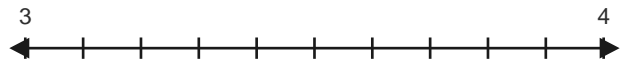
Date: _____

Express each decimal on the number lines. Draw the zoom lines and place the point yourself. — Tenths on Number Lines

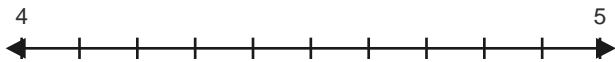
1) 1.3



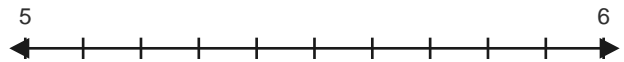
2) 3.2



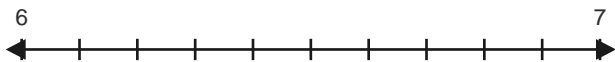
3) 4.2



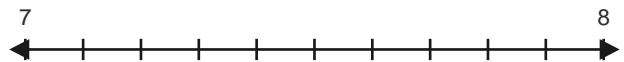
4) 5.3



5) 6.2



6) 7.5



7) 7.8



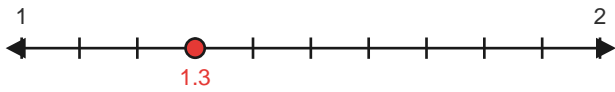
8) 9.2



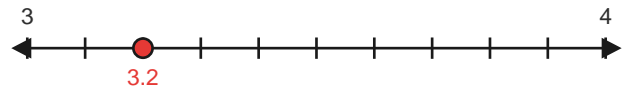
Answer Key

The red guide lines show how each decimal zooms into its exact place on the number lines. — Tenths on Number Lines

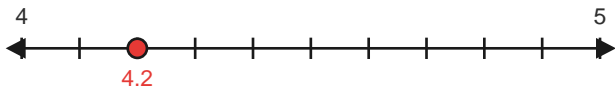
1) 1.3



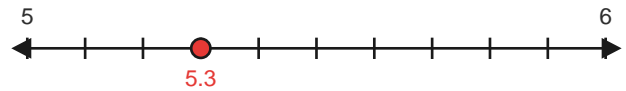
2) 3.2



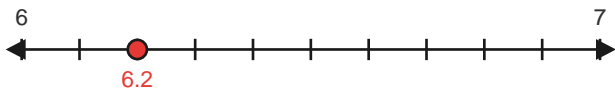
3) 4.2



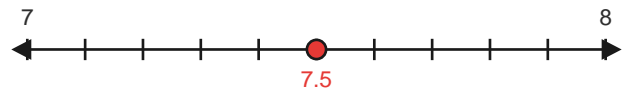
4) 5.3



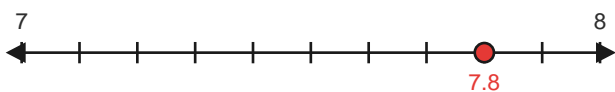
5) 6.2



6) 7.5



7) 7.8



8) 9.2

