

Subtraction on Number Lines

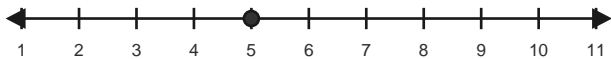
Name: _____

Date: _____

Use backward hops on the number line to solve each equation. - Within 10

1) $5 - 3 = \underline{\quad}$

Start at 5 and hop backward 3 times.



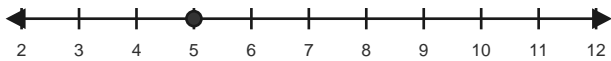
2) $6 - 4 = \underline{\quad}$

Start at 6 and hop backward 4 times.



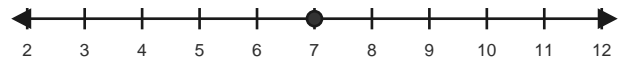
3) $5 - 2 = \underline{\quad}$

Start at 5 and hop backward 2 times.



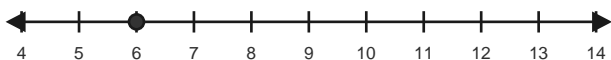
4) $7 - 4 = \underline{\quad}$

Start at 7 and hop backward 4 times.



5) $6 - 1 = \underline{\quad}$

Start at 6 and hop backward 1 times.



6) $8 - 1 = \underline{\quad}$

Start at 8 and hop backward 1 times.

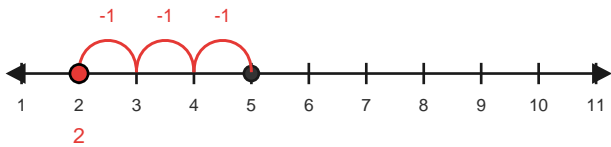


Answer Key

The red hops show one correct way to solve each subtraction equation. - Within 10

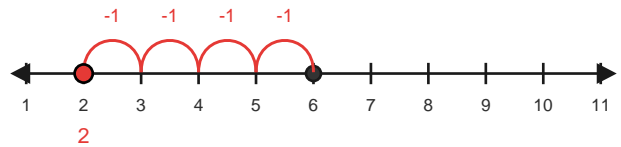
1) $5 - 3 = 2$

Start at 5 and hop backward 3 times.



2) $6 - 4 = 2$

Start at 6 and hop backward 4 times.



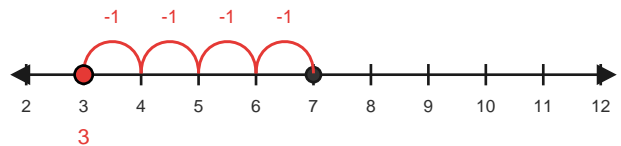
3) $5 - 2 = 3$

Start at 5 and hop backward 2 times.



4) $7 - 4 = 3$

Start at 7 and hop backward 4 times.



5) $6 - 1 = 5$

Start at 6 and hop backward 1 times.



6) $8 - 1 = 7$

Start at 8 and hop backward 1 times.

