

Subtraction on Number Lines

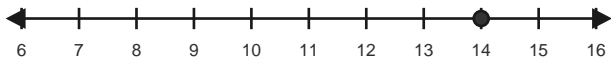
Name: _____

Date: _____

Use backward hops on the number line to solve each equation. - Within 40

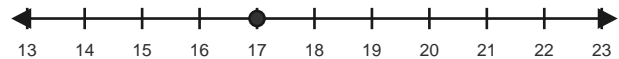
1) $14 - 7 = \underline{\quad}$

Start at 14 and hop backward 7 times.



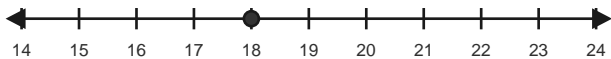
2) $17 - 3 = \underline{\quad}$

Start at 17 and hop backward 3 times.



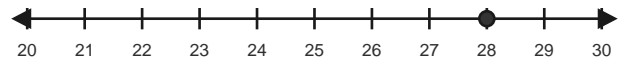
3) $18 - 3 = \underline{\quad}$

Start at 18 and hop backward 3 times.



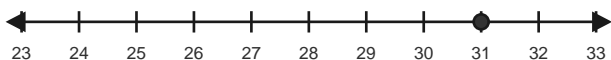
4) $28 - 7 = \underline{\quad}$

Start at 28 and hop backward 7 times.



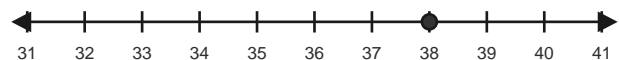
5) $31 - 7 = \underline{\quad}$

Start at 31 and hop backward 7 times.



6) $38 - 6 = \underline{\quad}$

Start at 38 and hop backward 6 times.

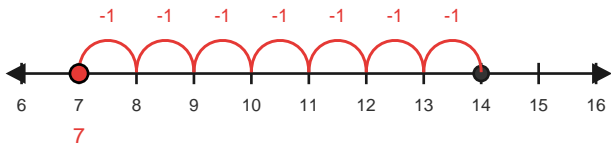


Answer Key

The red hops show one correct way to solve each subtraction equation. - Within 40

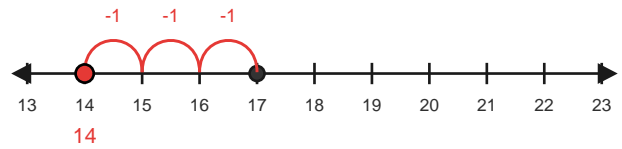
1) $14 - 7 = 7$

Start at 14 and hop backward 7 times.



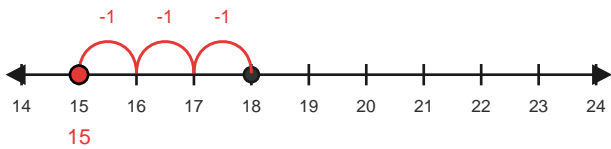
2) $17 - 3 = 14$

Start at 17 and hop backward 3 times.



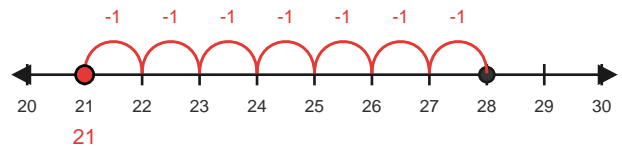
3) $18 - 3 = 15$

Start at 18 and hop backward 3 times.



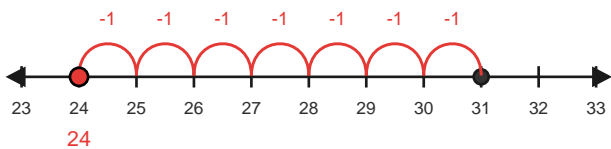
4) $28 - 7 = 21$

Start at 28 and hop backward 7 times.



5) $31 - 7 = 24$

Start at 31 and hop backward 7 times.



6) $38 - 6 = 32$

Start at 38 and hop backward 6 times.

