


Visual Subtraction

Name: _____

Date: _____

Cross out the removed objects and count what is left — Subtraction with Pictures (up to 10)



$4 - 1 = \underline{\quad}$




$5 - 2 = \underline{\quad}$



$5 - 4 = \underline{\quad}$



$6 - 1 = \underline{\quad}$



$6 - 2 = \underline{\quad}$




$6 - 3 = \underline{\quad}$



$6 - 4 = \underline{\quad}$



$7 - 1 = \underline{\quad}$



$8 - 4 = \underline{\quad}$



$9 - 2 = \underline{\quad}$



$9 - 4 = \underline{\quad}$



$10 - 4 = \underline{\quad}$

