

Visual Subtraction


Name: _____

Date: _____

Cross out the removed objects and count what is left — Subtraction with Pictures (up to 16)




$7 - 6 = \underline{\quad}$



$7 - 6 = \underline{\quad}$



$8 - 6 = \underline{\quad}$



$9 - 5 = \underline{\quad}$




$11 - 3 = \underline{\quad}$



$12 - 5 = \underline{\quad}$



$13 - 3 = \underline{\quad}$



$13 - 4 = \underline{\quad}$




$13 - 6 = \underline{\quad}$



$14 - 2 = \underline{\quad}$



$15 - 6 = \underline{\quad}$



$16 - 4 = \underline{\quad}$