

# Visual Subtraction

Name: \_\_\_\_\_

Date: \_\_\_\_\_

Cross out the removed objects and count what is left — Subtraction with Pictures (up to 16)



$5 - 4 = \underline{\quad}$




$6 - 3 = \underline{\quad}$



$6 - 4 = \underline{\quad}$




$7 - 2 = \underline{\quad}$



$8 - 4 = \underline{\quad}$



$8 - 5 = \underline{\quad}$




$8 - 6 = \underline{\quad}$



$11 - 3 = \underline{\quad}$




$12 - 4 = \underline{\quad}$



$13 - 2 = \underline{\quad}$



$14 - 5 = \underline{\quad}$



$14 - 6 = \underline{\quad}$