

# Visual Subtraction

Name: \_\_\_\_\_

Date: \_\_\_\_\_

Cross out the removed objects and count what is left — Subtraction with Pictures (up to 16)



$9 - 3 = \underline{\quad}$




$10 - 2 = \underline{\quad}$




$11 - 3 = \underline{\quad}$



$11 - 4 = \underline{\quad}$



$12 - 5 = \underline{\quad}$




$13 - 2 = \underline{\quad}$




$13 - 3 = \underline{\quad}$



$14 - 2 = \underline{\quad}$




$14 - 3 = \underline{\quad}$



$14 - 6 = \underline{\quad}$



$16 - 3 = \underline{\quad}$



$16 - 5 = \underline{\quad}$