

Visual Subtraction


Name: _____

Date: _____

Cross out the removed objects and count what is left — Subtraction with Pictures (up to 24)



$8 - 5 = \underline{\quad}$



$9 - 3 = \underline{\quad}$



$9 - 6 = \underline{\quad}$




$12 - 3 = \underline{\quad}$




$12 - 6 = \underline{\quad}$



$14 - 3 = \underline{\quad}$




$16 - 7 = \underline{\quad}$



$17 - 3 = \underline{\quad}$




$19 - 7 = \underline{\quad}$



$23 - 4 = \underline{\quad}$



$23 - 5 = \underline{\quad}$



$24 - 3 = \underline{\quad}$